

# **COLLOQUIUM IN MEDICAL CHEMISTRY**

Minsk BSMU 2022

МИНИСТЕРСТВО ЗДРАВООХРАНЕНИЯ РЕСПУБЛИКИ БЕЛАРУСЬ  
БЕЛОРУССКИЙ ГОСУДАРСТВЕННЫЙ МЕДИЦИНСКИЙ УНИВЕРСИТЕТ  
КАФЕДРА ОБЩЕЙ ХИМИИ

**КОЛЛОКВИУМ  
ПО МЕДИЦИНСКОЙ ХИМИИ**

**COLLOQUIUM  
IN MEDICAL CHEMISTRY**

Сборник заданий



Минск БГМУ 2022

УДК 54(075.8)-054.6  
ББК 24.1я73  
К60

Рекомендовано Научно-методическим советом университета в качестве  
сборника заданий 16.02.2022 г., протокол № 2

**А в т о р ы:** канд. биол. наук, доц. В. В. Хрусталёв; ассист. В. В. Побойнев; канд. мед. наук, доц. Т. В. Латушко; канд. хим. наук, доц. Л. Г. Петрушенко; ассист. Е. Ю. Кохановская; ассист. О. А. Бондарец; ассист. А. А. Акунович

**Р е ц е н з е н т ы:** канд. мед. наук, доц., зав. каф. биоорганической химии Белорусского государственного медицинского университета О. Н. Ринейская; каф. общей, физической и коллоидной химии Витебского государственного ордена Дружбы народов медицинского университета

**Коллоквиум** по медицинской химии = Colloquium in Medical Chemistry :  
К60 сборник заданий / В. В. Хрусталёв [и др.]. – Минск : БГМУ, 2022. – 36 с.  
ISBN 978-985-21-1005-1.

Содержит задания, распределенные по темам, соответствующим всем разделам курса медицинской химии.

Предназначен для студентов 1-го курса медицинского факультета иностранных учащихся, обучающихся на английском языке по специальностям «Лечебное дело» и «Стоматология».

УДК 54(075.8)-054.6  
ББК 24.1я73

---

Учебное издание

**Хрусталёв** Владислав Викторович

**Побойнев** Виктор Витольдович

**Латушко** Татьяна Викторовна и др.

## **КОЛЛОКВИУМ ПО МЕДИЦИНСКОЙ ХИМИИ** **COLLOQUIUM IN MEDICAL CHEMISTRY**

Сборник заданий

На английском языке

Ответственный за выпуск В. В. Хрусталёв

Переводчик В. В. Хрусталёв

Компьютерный набор В. В. Побойнева

Компьютерная вёрстка А. В. Янушкевич

Подписано в печать 15.03.22. Формат 60×84/16. Бумага писчая «Discovery».

Ризография. Гарнитура «Times».

Усл. печ. л. 2,09. Уч.-изд. л. 1,74. Тираж 300 экз. Заказ 87.

Издатель и полиграфическое исполнение: учреждение образования  
«Белорусский государственный медицинский университет».

Свидетельство о государственной регистрации издателя, изготовителя,  
распространителя печатных изданий № 1/187 от 18.02.2014.

Ул. Ленинградская, 6, 220006, Минск.

ISBN 978-985-21-1005-1

© УО «Белорусский государственный  
медицинский университет», 2022

## TASK № 1. PREPARATION OF SOLUTIONS

1. Find the mass of  $\text{Na}_2\text{SO}_4 \cdot 10\text{H}_2\text{O}$  that is needed to make 100 ml of sodium sulfate solution with the molar concentration of 0.02 mol/L.
2. What is the mass of  $\text{Na}_2\text{B}_4\text{O}_7 \cdot 10\text{H}_2\text{O}$  that is necessary to make 250 ml of 0.2N sodium tetraborate solution ( $f_{\text{eq}} = 1/2$ )?
3. What is the mass of  $\text{Na}_2\text{CO}_3 \cdot 10\text{H}_2\text{O}$  that is needed to make 100 ml of sodium carbonate solution with the mass percentage of  $\text{Na}_2\text{CO}_3$  equal to 2 %? The density of the final solution is equal to 1 g/ml.
4. What mass of  $\text{CuSO}_4 \cdot 5\text{H}_2\text{O}$  should we add to the 0.05 M  $\text{CuSO}_4$  solution to obtain a solution with mass percentage of  $\text{CuSO}_4$  equal to 5 %? The volume of the initial solution is equal to 200 ml, the density is equal to 1.01 g/ml.
5. What volume of water should we add to 100 g of  $\text{K}_2\text{SO}_4$  solution with the mass fraction equal to 2 % to make its final mass percentage equal to 1 %?
6. Calculate the mass percentage (%) of ethanol in the solution made by the addition of 30 ml of  $\text{C}_2\text{H}_5\text{OH}$  (the density of ethanol is 0.79 g/ml) to the water with a volume of 250 ml (the density of water is 1.00 g/ml).
7. Calculate what volume of hydrochloric acid solution (mass percentage of HCl in that solution is equal to 14 %, the density is equal to 1.073 g/ml) is needed to prepare 300 ml of diluted hydrochloric acid solution with the molar concentration of 0.01 mol/L (the density is equal to 1.000 g/ml).
8. Calculate the mass percentage (%) of ammonia in the solution made by the way of the dissolving of 2 L of  $\text{NH}_3$  (normal conditions) in 200 ml of water (the density of water is 1.00 g/ml).
9. Calculate the volume of ammonia (in normal conditions) that one needs to dissolve in 150 g of a solution that already contains 2 % of ammonia by mass to make 5 % ammonia solution?
10. The density of 40 % (by mass)  $\text{HNO}_3$  solution is equal to 1.25 g/ml. Calculate the molality of that solution.
11. The density of 12 % (by mass)  $\text{H}_2\text{SO}_4$  solution is equal to 1.105 g/ml. Calculate the molarity of that solution.
12. Convert the molarity to the mass fraction for 0.15 M  $\text{NaCl}$  solution. The density is equal to 1 g/ml.
13. Convert the mass percentage to molarity for 5 % solution of glucose. The density is equal to 1 g/ml.
14. Calculate the mole fraction of potassium chloride in a solution that contains 0.003 mol of  $\text{K}^+$ , 0.002 mol of  $\text{Na}^+$  and 0.005 mol of  $\text{Cl}^-$ . The volume of that solution is equal to 500 ml, the density is equal to 1 g/ml.
15. Calculate the molarity of  $\text{NaCl}$  solution that has a molality of 0.15 mol/kg. The density is equal to 1 g/ml.
16. Calculate the molality of glucose solution that has a molarity of 0.3 mol/L. The density is equal to 1.0175 g/ml.

17. Find out the normality of  $\text{KMnO}_4$  solution that has been made of 1 g of a dry potassium permanganate. The volume of a solution is equal to 600 ml. The solution has been prepared with the aim to use it as a titrant.

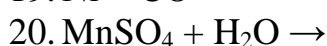
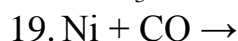
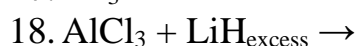
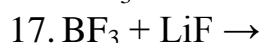
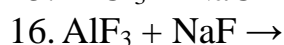
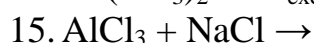
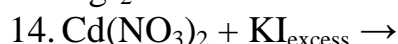
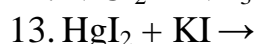
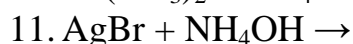
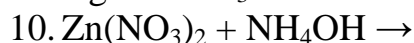
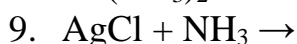
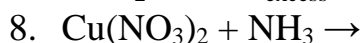
18. Calculate the normality of  $\text{H}_2\text{SO}_4$  solution prepared with the aim to use it as a titrant. The mass of that solution is 400 g, the mole fraction of sulfuric acid is 2 %. The density is equal to 1.0661 g/ml.

19. Calculate the titer (g/ml) of 0.004 M solution of a protein with the molar mass of 44 000 g/mole.

20. What is the molar concentration of  $\text{Cl}^-$  anions in a solution upon  $\text{AgCl}$  precipitate, if a solubility of  $\text{AgCl}$  is equal to 0.52 mg per 100 g of water? The density is equal to 1 g/ml.

## TASK № 2. COMPLEX COMPOUNDS

Write the complexation reaction in complete and ionic forms. Write the IUPAC names of the following coordination compounds.



### TASK № 3. CALCULATIONS IN TITRIMETRIC ANALYSIS

1. 15.40 ml of 0.1000 M HCl solution was used for titration of 20.00 ml of NaOH solution. Calculate the molar concentration of the NaOH solution.

2. 22.15 ml of 0.1313 M sodium thiosulfate solution was used for titration of 25.00 ml of iodine solution. Calculate the molar concentration of the iodine solution.

3. 24.15 ml of 0.05240 N sodium thiosulfate solution was used for titration of 20.00 ml of iodine solution. Calculate the titer of the iodine solution.

4. 21.50 ml of  $\text{KMnO}_4$  solution was used for titration of 0.02440 g of  $\text{H}_2\text{C}_2\text{O}_4 \cdot 2\text{H}_2\text{O}$ . Calculate the titer of potassium permanganate solution.

5. 100.0 ml of the solution contains 0.2550 g of sodium hydroxide. For the titration of 20.00 ml of this solution 18.50 ml of HCl solution was spent. Determine the molar concentration of the hydrochloric acid solution.

6. 15.00 ml of 0.1000 M  $\text{H}_2\text{SO}_4$  solution was spent for the titration of NaOH solution. Calculate the mass of sodium hydroxide in that solution.

7. 22.00 ml of 0.09840 M NaOH solution was spent for the titration of  $\text{H}_2\text{C}_2\text{O}_4$  solution. What mass of  $\text{H}_2\text{C}_2\text{O}_4 \cdot 2\text{H}_2\text{O}$  should be taken to prepare this solution?

8. 100.0 ml of the solution contains 1.400 g of  $\text{H}_2\text{C}_2\text{O}_4 \cdot 2\text{H}_2\text{O}$ . The solution was diluted 4 times and 20.00 ml of the resulting solution was titrated by 13.40 ml of NaOH solution. Determine the molar concentration of NaOH solution.

9. 14.50 ml of 0.08620 M HCl solution was spent for the titration of 15.00 ml of NaOH solution. Calculate the mass of NaOH in 500.0 ml of solution.

10. 15.15 ml of 0.1253 M HCl solution was spent for the titration of 10.00 ml of ammonia solution. Calculate the mass of  $\text{NH}_3$  in 400.0 ml of this solution.

11. Titration of 1.1250 g of technical  $\text{KMnO}_4$  sample required 24.10 ml of 0.1500 N  $\text{Na}_2\text{C}_2\text{O}_4$  solution. Determine the mass fraction of  $\text{KMnO}_4$  in the sample.

12. What mass of  $\text{Na}_2\text{B}_4\text{O}_7 \cdot 10\text{H}_2\text{O}$  had been taken to prepare 2 L of the solution, if 15.00 ml of this solution were titrated by 10.30 ml of HCl solution with a titer of 0.003606 g/cm<sup>3</sup>.

13. Titration of 1.086 g of borax ( $\text{Na}_2\text{B}_4\text{O}_7 \cdot 10\text{H}_2\text{O}$ ) required 28.22 ml of HCl solution. Hydrochloric acid solution was used to determine the sodium hydroxide solution concentration. It was found that  $V(\text{HCl})/V(\text{NaOH}) = 1.025$ . Calculate molar concentrations of HCl and NaOH solutions.

14. Solution contains 1.050 g of NaOH. To what volume should this solution be diluted to use 13.20 ml of 0.1041 M hydrochloric acid to titrate 20.00 ml of the obtained sodium hydroxide solution?

15. 15.80 ml of a 0.05000 N  $\text{K}_2\text{Cr}_2\text{O}_7$  solution was used for the titration of 20.00 ml of a  $\text{FeSO}_4$  solution in a sulfuric acid medium. What volume of water should be added to 100.0 ml of a solution of iron (II) sulfate to get a solution of exactly 0.01000 N?

16. A hydrogen peroxide solution was prepared by the way of dilution of the stock solution to 200.0 ml. The mass of the initial solution was 7.310 g. 20.00 ml of the prepared solution was treated with KI and HCl, and 21.50 ml of a 0.1000 N  $\text{Na}_2\text{S}_2\text{O}_3$  solution was used to titrate this solution. Determine the mass fraction of hydrogen peroxide in the stock solution.

17. 10.00 ml of 0.1133 N  $\text{KMnO}_4$  solution was added to the KI solution (in the presence of sulfuric acid). The iodine released during the reaction was titrated by 17.90 ml of  $\text{Na}_2\text{S}_2\text{O}_3$  solution. Calculate the molar concentration of the  $\text{Na}_2\text{S}_2\text{O}_3$  solution.

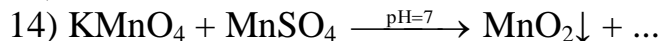
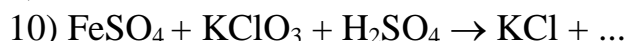
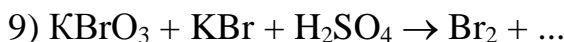
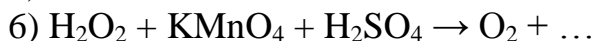
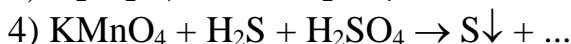
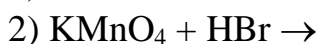
18. 0.02500 g of  $\text{K}_2\text{Cr}_2\text{O}_7$  was dissolved in distilled water and then HCl and an excess of KI were added to this solution. 25.50 ml of  $\text{Na}_2\text{S}_2\text{O}_3$  solution was used for titration of the iodine released during the reaction. Calculate the molar concentration of the  $\text{Na}_2\text{S}_2\text{O}_3$  solution.

19. 20.00 ml of 0.1000 N  $\text{FeSO}_4$  was added to 20.00 ml of  $\text{K}_2\text{Cr}_2\text{O}_7$  solution in the presence of sulfuric acid. 23.50 ml of a 0.05000N  $\text{KMnO}_4$  solution was used to titrate the excess of  $\text{FeSO}_4$ . Calculate the mass of  $\text{K}_2\text{Cr}_2\text{O}_7$  in 500.0 ml of that solution.

20. 100.0 ml of 0.09500 N iodine solution was added to the solution containing 2.500 g of technical sodium sulfite. 38.1 ml of a sodium thiosulfate solution (100.0 ml of sodium thiosulfate solution contained 1.448 g of sodium thiosulfate) was spent for the titration of the excess of iodine. Determine the mass percentage of  $\text{Na}_2\text{SO}_3$  in the sample.

#### TASK № 4. OXIDATION-REDUCTION PROCESSES

Finish the redox reaction and balance it with the help of the electron-ion method:



- 15)  $\text{KMnO}_4 + \text{KI} + \text{H}_2\text{O} \rightarrow$   
 16)  $\text{KMnO}_4 + \text{H}_2\text{C}_2\text{O}_4 + \text{H}_2\text{SO}_4 \rightarrow$   
 17)  $\text{Na}_2\text{SO}_3 + \text{NaI} + \text{H}_2\text{O} \rightarrow \text{S}\downarrow + \dots$   
 18)  $\text{H}_2\text{O}_2 + \text{MnCl}_2 + \text{KOH} \rightarrow \text{MnO}_2 + \dots$   
 19)  $\text{KMnO}_4 + \text{KNO}_2 + \text{KOH} \rightarrow$   
 20)  $\text{KBrO} + \text{MnCl}_2 + \text{KOH} \rightarrow \text{KBr} + \dots$

### **TASK № 5. COLLIGATIVE PROPERTIES OF SOLUTIONS: CALCULATIONS**

1. Calculate the expected vapor pressure at 25 °C upon a solution prepared by dissolving 158 g of common table sugar (sucrose, molar mass = 342.3 g/mol) in 643.5 cm<sup>3</sup> of water. At 25 °C the density of water is 0.99719 g/cm<sup>3</sup> and the vapor pressure is 3.17 kPa.

2. Predict the vapor pressure upon a solution prepared by mixing 35 g of solid Na<sub>2</sub>SO<sub>4</sub> (molar mass = 142 g/mol) with 175 g of water at 25 °C. The vapor pressure upon pure water at 25 °C is 3.17 kPa.

3. A solution is prepared by mixing 5.81 g of acetone (C<sub>3</sub>H<sub>6</sub>O, molar mass = 58.1 g/mol) and 11.9 g of chloroform (CHCl<sub>3</sub>, molar mass = 119.4 g/mol). The vapor pressures upon pure acetone and pure chloroform at 35 °C are 46.00 kPa and 39.06 kPa, respectively. What is the expected vapor pressure upon this mixture of two volatile liquids?

4. A solution was prepared by dissolving 18 g of glucose in 152.94 g of water. The resulting solution was found to have a boiling point at 100.34 °C. Calculate the molar mass of glucose from these data. Ebullioscopic constant for water is 0.52 kg·K/mol.

5. What mass of ethylene glycol (C<sub>2</sub>H<sub>6</sub>O<sub>2</sub>, molar mass = 62.1 g/mol), that is the main component of antifreeze, must be added to 10 dm<sup>3</sup> of water (cryoscopic constant of water is 1.86 kg·K/mol) to produce a solution for use in a car's radiator that freezes at -23.3 °C. Assume the density of water is exactly 1 g/cm<sup>3</sup>.

6. A sample of a human hormone that had a mass of 0.546 g was dissolved in 15 g of benzene, and the freezing point depression was found to be 0.24°C. Calculate the molar mass of the hormone if the cryoscopic constant for benzene is 5.12 kg·K/mol.

7. To determine the molar mass of a certain protein, 10<sup>-3</sup> g of it was dissolved in water to make 1 cm<sup>3</sup> of a solution. The osmotic pressure of this solution was found to be 0.1493 kPa at 25 °C. Calculate the molar mass of that protein.

8. Calculate the boiling point of an aqueous solution of urea, CO(NH<sub>2</sub>)<sub>2</sub>, with a concentration of 12.0 g/dm<sup>3</sup> at a pressure of 101.3 kPa. Assume that the volume of the solute is negligible compared to that of the solution, and that the boiling point elevation constant for water is 0.52 kg·K/mol.



9. In the solution of iodine in chloroform with the molality equal to 0.1 mol/kg the boiling point has been increased by 0.366 °C, relative to the one of the pure chloroform. Calculate the ebullioscopic constant of chloroform.

10. A solution containing 25.6 g of sulphur, dissolved in 1000 g of naphthalene, has a freezing point depression equal to 0.680 °C. Calculate the formula of sulphur molecules. The freezing point depression constant for naphthalene is 6.8 kg · K/mol. The melting point of naphthalene is 80.1 °C.

11. 0.900 g of a solute was dissolved in 100 cm<sup>3</sup> of benzene at 25 °C when its density is 0.879 g/cm<sup>3</sup>. This solution boiled at the temperature that is 0.25 °C higher than boiling point of pure benzene. Ebullioscopic constant of benzene is 2.52 kg · K/mol. Calculate the molecular mass of a solute.

12. Calculate the osmotic pressure of a solution containing 4.0 g of non-volatile solute (molar mass is 40 g/mol) per 1 dm<sup>3</sup> of the solution at 27 °C. Consider that a solute is nonelectrolyte.

13. Calculate the osmotic pressure of 1 percent solution of glucose in water at 25 °C. The density of solution is 1 g/cm<sup>3</sup>.

14. Calculate the freezing point of a solution made from 7 g of HNO<sub>2</sub> and 100 g of water. The pK<sub>a</sub> of nitrous acid at a given temperature is 3.398. The density of the final solution is 1.03 g/cm<sup>3</sup>. Cryoscopic constant for water is 1.86 kg · K/mol.

15. Calculate the temperature of boiling for a solution made from 5 g of HCOOH and 100 g of water. The pK<sub>a</sub> of formic acid at a given temperature is 3.77. The density of the final solution is equal to 1.01 g/cm<sup>3</sup>. Ebullioscopic constant of water is 0.52 kg · K/mol.

16. Calculate the osmotic pressure of the butanoic acid solution at 25 °C. The mass of the acid in 300 cm<sup>3</sup> of such solution is equal to 2.5 g. The pK<sub>a</sub> of butanoic acid is equal to 4.82.

17. After the dissolving of 322 g of organic substance in 300 cm<sup>3</sup> of water (the density of water is 1 g/cm<sup>3</sup>) the pressure of saturated vapor upon the solution has become 0.14 kPa lower. The pressure of saturated vapor upon clear water at the same temperature is 3.17 kPa. Calculate the molar mass of an organic substance that is nonelectrolyte.

18. The temperature of freezing of the solution made by the way of the dissolving of 5 g of HNO<sub>2</sub> in 100 g of water is equal to -2.02 °C. Calculate the constant of dissociation for nitrous acid if the density of the obtained solution is 1.03 g/cm<sup>3</sup>. The cryoscopic constant of water is 1.86 kg · K/mol.

19. The temperature of boiling of the solution made by the way of the dissolving of 5 g of HCOOH in 100 g of water is equal to 100.58 °C. Calculate the constant of dissociation of formic acid if the density of the obtained solution is 1.01 g/cm<sup>3</sup>. Ebullioscopic constant of water is equal to 0.52 kg · K/mol.

20. A solution containing 8 g of a substance in 100 g of diethyl ether boils at 36.86 °C, whereas the pure ether boils at 35.60 °C. Determine the molecular mass of the solute. The value of the ebullioscopic constant for ether is 2.02 kg · K/mol.

## TASK № 6. CHEMICAL THERMODYNAMICS

1. Calculate the  $\Delta H_r^0$  of the reaction between hydrogen sulfide and oxygen (the molar ratio is 2 : 1, respectively).  $\Delta H_f^0(\text{H}_2\text{S}) = -20.6 \text{ kJ/mol}$ ,  $\Delta H_f^0(\text{H}_2\text{O}) = -285.8 \text{ kJ/mol}$ .

2. Calculate  $\Delta G_r^0$  of the reaction of ammonia and hydrogen chloride, if  $\Delta G_f^0(\text{HCl}) = -94.8 \text{ kJ/mol}$ ,  $\Delta G_f^0(\text{NH}_3) = -16.7 \text{ kJ/mol}$ ,  $\Delta G_f^0(\text{NH}_4\text{Cl}) = -203.2 \text{ kJ/mol}$ .

3. Calculate  $\Delta S_r^0$  for the reaction between aluminum and dilute sulfuric acid.  $S^0(\text{Al}) = 28.35 \text{ J/mol} \cdot \text{K}$ ,  $S^0(\text{H}_2\text{SO}_4) = 156.9 \text{ J/mol} \cdot \text{K}$ ,  $S^0(\text{Al}_2(\text{SO}_4)_3) = 239.2 \text{ J/mol} \cdot \text{K}$ ,  $S^0(\text{H}_2) = 130.6 \text{ J/mol} \cdot \text{K}$ .

4. Calculate  $\Delta G_r^0$  of the reaction of potassium superoxide formation in standard conditions, if  $\Delta H_r^0 = -280.00 \text{ kJ/mol}$ ,  $\Delta S_r^0 = -229.29 \text{ J/mol} \cdot \text{K}$ .

5. Calculate the enthalpy of hydration for magnesium sulfate, if the enthalpy of the dissolving of  $\text{MgSO}_4 \cdot 7\text{H}_2\text{O}$  in water is equal to  $+16.14 \text{ kJ/mol}$ , while the enthalpy of the dissolving of dry  $\text{MgSO}_4$  in water is equal to  $-85.06 \text{ kJ/mol}$ .

6. Calculate  $\Delta H_r^0$  for the reaction between copper (II) oxide and carbon, if carbon monoxide is formed in that reaction.

$$\Delta H_f^0(\text{CuO}) = -162.0 \text{ kJ/mol}, \quad \Delta H_f^0(\text{CO}) = -110.6 \text{ kJ/mol}$$

7. Calculate the value of  $\Delta S_r^0$  for a reaction between CaO and water, if  $S^0(\text{CaO}) = 39.75 \text{ J/mol} \cdot \text{K}$ ,  $S^0(\text{H}_2\text{O}) = 69.95 \text{ J/mol} \cdot \text{K}$ ,  $S^0(\text{Ca}(\text{OH})_2) = 83.39 \text{ J/mol} \cdot \text{K}$ .

8. Calculate  $\Delta G_r^0$  of the esterification reaction between ethanol and acetic acid, if  $\Delta G_f^0(\text{C}_2\text{H}_5\text{OH}) = -174.78 \text{ kJ/mol}$ ,  $\Delta G_f^0(\text{CH}_3\text{COOH}) = -173.991 \text{ kJ/mol}$ ,  $\Delta G_f^0(\text{CH}_3\text{COOC}_2\text{H}_5) = -251.12 \text{ kJ/mol}$ ,  $\Delta G_f^0(\text{H}_2\text{O}) = -237.129 \text{ kJ/mol}$ .

9. Calculate the value of  $\Delta G_r^0$  of the reaction:  $\text{SO}_{2(\text{g})} + 2\text{H}_2\text{S}_{(\text{g})} = 3\text{S}_{(\text{s})} + 2\text{H}_2\text{O}_{(\text{l})}$ .

$$\Delta G_f^0(\text{SO}_2) = -300.4 \text{ kJ/mol}; \quad \Delta G_f^0(\text{H}_2\text{O}) = -237.3 \text{ kJ/mol};$$

$$\Delta G_f^0(\text{H}_2\text{S}) = -33 \text{ kJ/mol}$$

10. Calculate the enthalpy of hydration for  $\text{CuSO}_4$ , if the enthalpy of the dissolving of  $\text{CuSO}_4 \cdot 5\text{H}_2\text{O}$  in water is equal to  $+11.7 \text{ kJ/mol}$ , while the enthalpy of the dissolving of dry  $\text{CuSO}_4$  in water is equal to  $-66.1 \text{ kJ/mol}$ .

11. Calculate the heat effect of the reaction between lithium and water, if  $\Delta H_f^0(\text{H}_2\text{O}) = -237.129 \text{ kJ/mol}$ ,  $\Delta H_f^0(\text{LiOH}_{(\text{s})}) = -484.93 \text{ kJ/mol}$ , and the final product is the solid lithium hydroxide.

12. Calculate the heat effect of the reaction between lithium and water, if  $\Delta H_f^0(\text{H}_2\text{O}) = -237.129 \text{ kJ/mol}$ ,  $\Delta H_f^0(\text{LiOH}_{(\text{aq})}) = -508.48 \text{ kJ/mol}$ , and the final product is the aqueous lithium hydroxide.

13. Calculate the heat effect of the dissolving of a dry copper sulfate  $\text{CuSO}_4$ , if the heat effect of the dissolving of its salt hydrate ( $\text{CuSO}_4 \cdot 5\text{H}_2\text{O}$ ) is equal to  $-11.7 \text{ kJ}$ , while the heat of hydration for a dry salt is equal to  $77.8 \text{ kJ}$ .

14. Find out the value of thermodynamical probability for 1 mole of a solid water (the ice) in standard conditions, if its  $S^0 = 41.00 \text{ J/mol} \cdot \text{K}$ .

15. Find out the value of thermodynamical probability for 1 mole of a liquid water in standard conditions, if its  $S^0 = 69.95 \text{ J/mol} \cdot \text{K}$ .

16. Find out the value of thermodynamical probability for 1 mole of a gaseous water (vapor) in standard conditions, if its  $S^0 = 188.84 \text{ J/mol} \cdot \text{K}$ .

17. The value of  $\Delta H_r^0$  is equal to  $30 \text{ kJ/mol}$ . What is the value of  $\Delta S_r^0$  for this reaction, if it is in the state of equilibrium in standard conditions?

18. The value of  $\Delta S_r^0$  is equal to  $-55 \text{ J/mol} \cdot \text{K}$ . What is the value of  $\Delta H_r^0$  for this reaction, if it is in the state of equilibrium in standard conditions?

19. Calculate the constant of equilibrium for a chemical reaction with  $\Delta G^0 = -100 \text{ kJ/mol}$ .

20. Calculate the constant of equilibrium for a chemical reaction with  $\Delta G^0 = -2 \text{ kJ/mol}$ .

## TASK № 7. CHEMICAL KINETICS

1. For a homogeneous reaction in the container with a volume of 3 L the amount of a reactant decreased from 5 to 2.2 mol in 5 seconds. Calculate the average rate of that reaction.

2. For a homogeneous reaction in the container with a volume of 8 L the amount of a product increased from 0 to 7.3 mol in 60 seconds. Calculate the average rate of that reaction.

3. Calculate the rate constant for a simple reaction between two gaseous substances ( $A + B = C$ ), if the rate of a reaction is equal to  $0.02 \text{ mol/L} \cdot \text{sec}$ , the concentration of A is  $0.02 \text{ mol/L}$ , and the concentration of B is  $0.03 \text{ mol/L}$ .

4. Calculate the rate constant for a simple reaction between two gaseous substances ( $A + 2B = C$ ), if the rate of a reaction is equal to  $0.08 \text{ mol/L} \cdot \text{sec}$ , the concentration of A is  $0.01 \text{ mol/L}$ , and the concentration of B is  $0.04 \text{ mol/L}$ .

5. Calculate the rate constant for a simple reaction between two substances ( $A_{(g)} + 2B_{(s)} = C$ ), if the rate of a reaction is equal to  $0.04 \text{ mol/L} \cdot \text{sec}$ , the concentration of A is  $0.01 \text{ mol/L}$ .

6. In the equilibrium state in the reaction  $2\text{SO}_2(g) + \text{O}_2(g) \rightleftharpoons 2\text{SO}_3(g)$  concentrations of  $\text{SO}_2$ ,  $\text{O}_2$  and  $\text{SO}_3$  (mol/L) are equal to 0.3; 0.2 and 0.7. Find the constant of equilibrium according to the law of mass action.

7. There is a system in equilibrium:  $2\text{SO}_2(g) + \text{O}_2(g) \rightleftharpoons 2\text{SO}_3(g)$ . The equilibrium concentration of  $\text{SO}_3$  is equal to  $0.25 \text{ mol/L}$ . Calculate the equilibrium concentration of oxygen (mol/L), if you know that 15 % of the initial amount of oxygen has been consumed until the establishment of equilibrium.

8. Calculate vant Hoff's coefficient of a reaction, if after the increase in temperature that is equal to  $40 \text{ }^\circ\text{C}$  the rate of the reaction increased 16 times?

9. Vant Hoff's coefficient of a reaction is equal to 3. At what temperature one should run this reaction to increase its rate 81 times? Initial temperature is  $25 \text{ }^\circ\text{C}$ .

10. Calculate the vant Hoff's coefficient of a reaction at  $25 \text{ }^\circ\text{C}$ , if its energy of activation is equal to  $100 \text{ kJ/mol}$ . The preexponential factor in the Arrhenius equation stays the same.

11. Calculate how the half-elimination period will change in case of the 2 times increase of a dose of a medicine, if its metabolization follows kinetics of 0-th, 1-st, and 2-nd order.

12. Calculate the vant Hoff's coefficient of a reaction at 25 °C, if its energy of activation is equal to 5 kJ/mol. The preexponential factor in the Arrhenius equation stays the same.

13. Calculate the vant Hoff's coefficient of a reaction at 75 °C, if its energy of activation is equal to 5 kJ/mol. The preexponential factor in the Arrhenius equation stays the same.

14. How many times the rate of the reaction will increase after the growth of temperature from 20 to 50 °C, if the preexponential factor in the Arrhenius equation stays the same, and the energy of activation is 50 kJ/mol?

15. How many times the rate of the reaction will decrease after the decline of temperature from 40 to 20 °C, if the preexponential factor in the Arrhenius equation stays the same, and the energy of activation is 160 kJ/mol?

16. Calculate the energy of activation, if the rate of the reaction decreased 9 times after the decline of temperature from 50 to 30 °C. The preexponential factor in the Arrhenius equation stays the same.

17. Find the energy of activation, if the rate of the reaction increased 10 times after the growth of temperature from 30 to 50 °C. The preexponential factor in the Arrhenius equation stays the same.

18. What is the fraction of activated particles in a certain reaction, if the value of the energy of activation is equal to 20 kJ/mol at the temperature of 37 °C?

19. Kinetics of a certain chemical reaction has been studied, the Arrhenius plot has been built. The dependence between  $\ln K$  and  $(1/T)$  is described by the following equation:  $y = -12033x + 65$ . Calculate the energy of activation.

20. Kinetics of a certain chemical reaction has been studied, the Arrhenius plot has been built. The dependence between  $\ln K$  and  $(1/T)$  is described by the following equation:  $y = -66037x + 77$ . Calculate the preexponential factor.

## **TASK № 8. ACIDITY OF WATER SOLUTIONS**

1. Calculate the pH of a solution that contains 0.000048 mol/L of  $H^+$  cations.

2. Calculate the pH of a solution that contains 0.000033 mol/L of  $OH^-$  anions.

3. Calculate the pH of  $HNO_3$  solution, if the concentration of nitric acid is equal to 0.0003 mol/L. The coefficient of activity is equal to 1.

4. Calculate the pH of  $HNO_3$  solution with the mass percentage of nitric acid equal to 0.005 %. The coefficient of activity is equal to 1, the density of the solution is equal to 1 g/ml.

5. Calculate the pH in 300 ml of  $\text{H}_2\text{SO}_4$  solution with mass percentage 0.002 %, if the activity coefficient is equal to 0.87 and the density of a solution is equal to 1 g/ml.

6. Calculate the pH of  $\text{CH}_3\text{COOH}$  solution, if the concentration of acetic acid is equal to 0.17 mol/L and its dissociation constant ( $K_a$ ) is equal to  $1.75 \cdot 10^{-5}$ .

7. Calculate the pH of HF solution with mass percentage of hydrogen fluoride equal to 0.01 %, if  $\text{p}K_a = 3.17$  and the density of a solution is equal to 1.01 g/ml.

8. Calculate the dissociation degree of  $\text{HCOOH}$  in its solution with the concentration equal to 0.01 mol/L, if  $K_a = 1.8 \cdot 10^{-4}$ .

9. Calculate the pH of  $\text{NH}_4\text{OH}$  solution with mass percentage of ammonium hydroxide equal to 5 %, if the density of that solution is 0.99 g/ml and  $\text{p}K_b$  ( $\text{NH}_4\text{OH}$ ) = 4.75.

10. Calculate the pH in HCN solution with the concentration of prussic acid equal to 0.03 M, if its dissociation degree is 0.8 %.

11. Calculate the pH of KOH solution, if the concentration of potassium hydroxide is equal to  $4.2 \cdot 10^{-4}$  mol/L. The coefficient of activity is equal to 1.

12. Calculate the pH of  $\text{NH}_4\text{OH}$  solution, if the concentration of ammonia is equal to 1 mol/L and the dissociation constant of ammonium hydroxide ( $K_b$ ) is equal to  $1.77 \cdot 10^{-5}$ .

13. Calculate the pOH of HCN solution with the concentration equal to 0.2 N, the dissociation degree is 0.03.

14. Calculate the dissociation constant of an acid, if its concentration is equal to 0.08 mol/L and  $\text{pH} = 2.4$ .

15. Calculate  $\text{p}K_a$  of an acid, if in the solution with its concentration equal to 0.02 mol/L  $\text{pH}$  is equal to 3.6.

16. Calculate the molar concentration of  $\text{CH}_3\text{COOH}$  in a solution, if  $\text{pH} = 3$  and  $K_a = 1.75 \cdot 10^{-5}$ .

17. Calculate the mass of  $\text{HCOOH}$  in 300 ml of its solution, if  $\text{pH} = 3.04$  and  $K_a = 1.77 \cdot 10^{-4}$ .

18. Calculate potential acidity of gastric juice (mol/L), if its  $\text{pH} = 2.2$  and to titrate 10 ml of that juice 8.8 ml of 0.1M NaOH solution have been used.

19. Calculate the pH of the solution, if we add 0.5 ml of 0.1 M NaOH solution to 500 ml of pure water.

20. How many times the hydrogen ion concentration in blood ( $\text{pH} = 7.4$ ) is higher than that in the cerebrospinal fluid ( $\text{pH} = 7.6$ )?

## TASK № 9. BUFFER SYSTEMS

1. Two liters of buffer solution contains 13.6 g of  $\text{KH}_2\text{PO}_4$  and 17.4 g of  $\text{K}_2\text{HPO}_4$ . Determine the pH level in this solution if  $K_d$  ( $\text{H}_2\text{PO}_4^-$ ) =  $6,23 \cdot 10^{-8}$ .

2. Determine the pH level in the solution obtained by mixing 10 ml of 0.1 M solution of propanoic acid and 20 ml of 0.1 M solution of potassium propionate.  $pK_a$  for propanoic acid is 4.88.

3. Determine the pH level of the solution obtained after the addition of 20.5 g of  $CH_3COONa$  to 2 liters of 0.15 M acetic acid solution.  $K_d(CH_3COOH) = 1.75 \cdot 10^{-5}$ .

4. Determine the pH level in the solution obtained by adding 5 ml of 0.05 M NaOH solution to 50 ml of 0.02 M propanoic acid solution.  $pK_a$  of propanoic acid is 4.88.

5. KOH (0.04 mol) was added to 100 ml of a buffer solution containing 0.1 mol of formic acid and 0.2 mol of potassium formate. What is the pH level of the solution after the addition of KOH ( $pK_a(HCOOH) = 3.75$ )?

6. HCl (0.005 mol) was added to 500 ml of buffer solution containing 0.2 mol of  $NH_4OH$  and 0.4 mol of  $NH_4Cl$ . What is the pH level of the solution after the addition of HCl ( $pK_b(NH_4OH) = 4.75$ )?

7. Calculate the pH level of ammonia buffer solution containing 0.02 mol of  $NH_4OH$  and 0.2 mol of  $NH_4Cl$  ( $pK_b(NH_4OH) = 4.75$ ).

8. Is it possible to prepare an acetate buffer with  $pH = 5.0$ , if  $K_d(CH_3COOH) = 1.75 \cdot 10^{-5}$ ? The answer must be confirmed by calculations.

9. Acetate buffer solution with a concentration of each component equal to 0.25 mol/l has a pH level equal to 4.76. What is the buffer capacity (mmol/L·pH unit) for a given solution, if after the addition of 20 ml of 0.01 M HCl solution to 0.5 L of that buffer solution, the pH decreased to 4.59?

10. What is the buffer capacity of the phosphate buffer, if after the addition of 0.00015 mol of HCl to 100 ml of this solution, its pH changed by 0.15 units?

11. What is the buffer capacity of the phosphate buffer, if after the addition of 5.015 g of 0.01 N HCl solution to 0.025 L of that buffer pH changed from 7.4 to 7.2 (the density of HCl solution is equal to 1.003 g/ml)?

12. What is the buffer capacity of the phosphate buffer, if after the addition of 1 ml of hydrochloric acid with a molar concentration of HCl equal to 0.02 mol/L to 0.1 L of buffer solution, its pH changed by 0.1 unit?

13. In what molar ratio one should take sodium propionate and propanoic acid for the buffer solution preparation with  $pH = 4$ ?  $pK_a$  for propanoic acid is 4.88?

14. In what molar ratio one should take  $Na_2HPO_4$  and  $NaH_2PO_4$  for the preparation of buffer solution with  $pH = 7.4$ ?  $K_d(H_2PO_4^-) = 6,2318 \cdot 10^{-8}$ .

15. Determine the pH level of the buffer system obtained by the way of the dissolving  $KH_2PO_4$  and  $K_2HPO_4$  in water at a molar ratio of 1 : 12.  $K_d(H_2PO_4^-) = 6,23 \cdot 10^{-8}$ .

16. What volume of 0.25 M potassium acetate solution should be added to 50 ml of 1.0 M acetic acid solution to obtain a buffer solution with  $pH = 3.0$ ?  $K_d(CH_3COOH) = 1.75 \cdot 10^{-5}$ .

17. What mass of sodium acetate should be added to 100 ml of 1.0 M acetic acid solution to obtain a buffer solution with  $pH = 3.5$ ?  $K_d(CH_3COOH) = 1.75 \cdot 10^{-5}$ .

18. Determine the pH level of the solution obtained by mixing together equal volumes of  $\text{CH}_3\text{COOH}$  solution ( $C = 0.2 \text{ mol/L}$ ) and  $\text{CH}_3\text{COOK}$  solution ( $C = 0.2 \text{ mol/L}$ ).  $K_d(\text{CH}_3\text{COOH}) = 1.75 \cdot 10^{-5}$ .

19. Determine the pH level of the buffer solution obtained by mixing 50 ml of 0.15 M potassium dihydrogen phosphate solution and 30 ml of 0.2 M potassium hydrogen phosphate solution.  $\text{p}K_a(\text{H}_2\text{PO}_4^-) = 7.21$ .

20. What mass of anhydrous sodium acetate should be added to 400 ml of a solution with molar concentration of  $\text{CH}_3\text{COOH} = 1 \text{ mol/L}$  for the preparation of a solution with pH equal to 4.1?  $K_d(\text{CH}_3\text{COOH}) = 1.75 \cdot 10^{-5}$ .

### TASK № 10. STRUCTURE OF COLLOID PARTICLES

1. Write the scheme of the micelle of sol made by the way of the mixing equal volumes of 0.1 N KCNS solution and 0.008 N  $\text{AgNO}_3$  solution.

2. Write the scheme of the micelle of sol made by the way of the mixing the excess of  $\text{Pb}(\text{NO}_3)_2$  solution and a drop of NaCl solution.

3. Write the scheme of the micelle of sol made by the way of the mixing equal volumes of 0.005 M  $\text{AgNO}_3$  solution and 0.3 M  $\text{Na}_3\text{PO}_4$  solution.

4. Write the scheme of the micelle of sol made by the way of the mixing equal volumes of  $\text{AgNO}_3$  and  $\text{K}_2\text{CrO}_4$  solutions. In the electric field, the granules moved to the anode.

5. Write the scheme of the micelle of sol made by the way of the mixing equal volumes of 0.002 M KBr solution and 0.096 M  $\text{AgNO}_3$  solution.

6. Write the scheme of the micelle of sol made by the way of the mixing 20 ml of 0.001 N  $\text{MnSO}_4$  solution and 5 ml of 0.2 N  $\text{Na}_3\text{PO}_4$  solution.

7. Write the scheme of the micelle of sol made by the way of the mixing the excess of  $\text{CoSO}_4$  solution and a drop of  $(\text{NH}_4)_2\text{S}$  solution.

8. Write the scheme of the micelle of sol made by the way of the mixing equal volumes of  $\text{CoSO}_4$  and  $(\text{NH}_4)_2\text{S}$  solutions. In the electric field, the granules moved to the anode.

9. Write the scheme of the micelle of sol made by the way of the mixing 10 ml of 0.05 N  $\text{Ba}(\text{NO}_3)_2$  solution and 15 ml of 0.001 N  $\text{H}_2\text{SO}_4$  solution.

10. Write the scheme of the micelle of sol made by the way of the mixing 25 ml of 0.08 N KBr solution and 10 ml of 0.0001 N  $\text{AgNO}_3$  solution.

11. Write the scheme of the micelle of sol made by the way of the mixing the excess of  $\text{BaCl}_2$  solution and a drop of  $\text{K}_2\text{CrO}_4$  solution.

12. Write the scheme of the micelle of sol made by the way of the mixing 20 ml of 0.01 N KI solution and 30 ml of 0.0007 N  $\text{AgNO}_3$  solution.

13. Write the scheme of the micelle of sol made by the way of the mixing 30 ml of 0.01 N  $(\text{NH}_4)_2\text{S}$  solution and 25 ml of 0.0005 N  $\text{CuSO}_4$  solution.

14. Write the scheme of the micelle of sol made by the way of the mixing the excess of  $\text{Na}_2\text{SO}_4$  solution and a drop of  $\text{Pb}(\text{NO}_3)_2$  solution.

15. Write the scheme of the micelle of sol made by the way of the mixing equal volumes of  $\text{Pb}(\text{NO}_3)_2$  and  $\text{Na}_2\text{SO}_4$  solutions. In the electric field, the granules moved to the cathode.

16. Write the scheme of the micelle of sol made by the way of the mixing 10 ml of 0.85 %  $\text{NaCl}$  solution and 25 ml of 0.001 N  $\text{AgNO}_3$  solution.

17. Write the scheme of the micelle of sol made by the way of the mixing the excess of  $\text{BaCl}_2$  solution and a drop of  $(\text{NH}_4)_2\text{CO}_3$  solution.

18. Write the scheme of the micelle of sol made by the way of the mixing the excess of  $(\text{NH}_4)_2\text{CO}_3$  solution and a drop of  $\text{BaCl}_2$  solution.

19. Write the scheme of the micelle of sol made by the way of the mixing 25 ml of 0.001 N  $\text{MnCl}_2$  solution and 8 ml of 0.2 N  $(\text{NH}_4)_2\text{S}$  solution.

20. Write the scheme of the micelle of sol made by the way of the mixing the excess of  $\text{KI}$  solution and a drop of  $\text{Pb}(\text{NO}_3)_2$  solution.

### TASK № 11. TITRIMETRIC ANALYSIS

1. The volume of a single drop pouring out from a burette is equal to \_\_\_\_ ml.  
2. At the moment of the completion of a reaction between the titrant and the defined substance \_\_\_\_\_ is reached.

3. One has to choose the indicator used in acid-base titration according to its \_\_\_\_\_ that has to correspond to the jump on a titration curve.

4. The point of equivalence on the curve of titration of 0.1 M hydrochloric acid solution by 0.1 M sodium hydroxide solution is situated at  $\text{pH} = \underline{\hspace{2cm}}$ .

5. The point of equivalence on the curve of titration of 0.1 M acetic acid solution by 0.1 M alkali solution is situated in \_\_\_\_\_ medium.

6. The point of equivalence on the curve of titration of 0.1 M ammonia solution by 0.1 M hydrochloric acid solution is situated in \_\_\_\_\_ medium.

7. Give a formula of a hydrate that can be used as primary standard for alkali solution standardization in the acid-base titration.

8. Write a formula of borax that can be used as primary standard for acid solution standardization in the acid-base titration.

9. Which indicator is used to fix the equivalence point in permanganometry?

10. Write the law of equivalence equation.

11. In the method of permanganometry the main titrant is \_\_\_\_\_

12. As an indicator in iodometry we use water solution of \_\_\_\_\_

13. The higher the standard redox potential for a pair of oxidizer and reducer, the \_\_\_\_\_ the oxidizing agent from that pair.

14. We use \_\_\_\_\_ technique of titration to determine the concentration of reducing agents in permanganometry.

15. We use, as a rule, \_\_\_\_\_ titration technique to determine the concentration of oxidizing agents in permanganometry.



16. Iodometric determination of oxidizing agents is carried out using the technique of \_\_\_\_\_ titration.
17. Write the formula of a hydrate that can be used as a primary standard for  $\text{KMnO}_4$  solution.
18. The oxidizer in the method of iodometry is \_\_\_\_\_
19. What is the value of the factor of equivalence of  $\text{Na}_2\text{S}_2\text{O}_3$  used as a titrant in iodometry?
20. Primary standard must be a substance with \_\_\_\_\_ stoichiometric content.

## TASK № 12. COLLIGATIVE PROPERTIES OF SOLUTIONS: THEORY

1. The major contribution into the osmotic pressure of blood plasma is made by \_\_\_\_\_ cations.
2. The major contribution into the osmotic pressure of intracellular liquid is made by \_\_\_\_\_ cations.
3. A solution in which red blood cells (erythrocytes) are hemolyzed (burst) is \_\_\_\_\_ relative to the blood plasma.
4. The part of the osmotic pressure of blood plasma that is due to the presence of proteins is called \_\_\_\_\_ pressure.
5. The major contribution into the osmotic pressure of blood plasma is made by \_\_\_\_\_ anions.
6. The major contribution into the osmotic pressure of intracellular liquid is made by \_\_\_\_\_ anions.
7. Sodium chloride solution is isotonic relative to the blood plasma, if the mass fraction of  $\text{NaCl}$  inside it is equal to \_\_\_\_\_. Glucose solution is isotonic to blood plasma if its mass fraction is \_\_\_\_\_.
8. Transport of water in cells is controlled by transmembrane proteins known as \_\_\_\_\_.
9. Boiling point is the temperature at which the vapor pressure of the liquid becomes equal to the \_\_\_\_\_.
10. The vapor pressure upon a solution is \_\_\_\_\_ by the addition of a nonvolatile solute.
11. At freezing point, the vapor pressure upon the solid and the liquid phase is the \_\_\_\_\_.
12. Osmotic pressure in a solution of an electrolyte is \_\_\_\_\_ than in a solution of a nonelectrolyte of the same molarity.
13. Solutions with the same values of osmolarity are \_\_\_\_\_ to each other.
14. One  $\text{dm}^3$  of a solution with osmotic pressure of 2.27 kPa at 0 °C contains \_\_\_\_\_ moles of nonelectrolyte.

15. Because of the liver failure edema appears because of \_\_\_\_\_ protein \_\_\_\_\_, unlike during long starvation or in case of kidney failure.
16. Plasmolysis of red blood cells happens in a solution that is \_\_\_\_\_ to the blood plasma.
17. Osmosis is a movement of solute molecules from the region with \_\_\_\_\_ osmolarity to the region with \_\_\_\_\_ osmolarity through the semipermeable membrane.
18. The distribution of water between capillaries and tissues depends on \_\_\_\_\_ and \_\_\_\_\_.
19. Van't Hoff isotonic coefficient for  $\text{BaCl}_2$  in a dilute solution is approximately equal to \_\_\_\_\_.
20. The higher the ionic strength of a solution, the \_\_\_\_\_ the coefficient of activity for each ion.

### TASK № 13. ACIDITY OF BIOLOGICAL FLUIDS

1. What are the limits of urine pH level in a healthy person?
2. What are the limits of blood plasma pH level in a healthy person?
3. What are the limits of gastric juice pH level in a healthy person?
4. What are the limits of pancreatic juice pH level in a healthy person?
5. What are the limits of saliva pH level in a healthy person?
6. Total acidity is the total concentration of \_\_\_\_\_ and \_\_\_\_\_ acids.
7. Active acidity is equal to the concentration of active \_\_\_\_\_ in the solution.
8. Total acidity is determined by the \_\_\_\_\_ method.
9. Active acidity is determined with the help of \_\_\_\_\_.
10. Potential acidity is equal to the concentration of \_\_\_\_\_ acids.
11. The value of potential acidity is equal to the difference between the values of \_\_\_\_\_ and \_\_\_\_\_.
12. The \_\_\_\_\_ method of active acidity determination is more accurate than \_\_\_\_\_ method.
13. If the concentration of  $\text{H}^+$  cations in blood plasma has an increased value, this state is called \_\_\_\_\_.
14. If the concentration of  $\text{H}^+$  cations in body fluids has a decreased value because of the increase of concentration of acidic metabolites, this state is called \_\_\_\_\_.
15. If the concentration of  $\text{H}^+$  cations in blood plasma has a decreased value, this state is called \_\_\_\_\_.
16. If the concentration of  $\text{H}^+$  cations in body fluids has a decreased value because of the loss of acidic metabolites, this state is called \_\_\_\_\_.
17. In acidic medium concentration of  $\text{H}^+$  is \_\_\_\_\_ than concentration of  $\text{OH}^-$ .

18. During the titration of a weak acid by a strong base pH is changing slowly because of the formation of \_\_\_\_\_.

19. Because of the dissolving of carbon dioxide from the air, pH of distilled water becomes \_\_\_\_\_.

20. If we dissolve ammonia in distilled water, the value of pH will \_\_\_\_\_.

#### **TASK № 14. BUFFERING SYSTEMS OF HUMAN BODY**

1. The ability of some solutions to keep the concentration of hydrogen cations (pH) almost constant after the addition of small amount of acid or base and at dilution is called \_\_\_\_\_ action.

2. Write the equation that is used to calculate the pH of a buffer system consisting of a weak base and its salt.

3. At what molar ratio of a weak acid and its salt the pH of buffer solution is equal to the  $pK_a$ ?

4. Buffer system effectively maintains the concentration of hydrogen cations if the value of pH in a solution is within \_\_\_\_\_ from  $pK_a$  of a weak acid.

5. Buffer solutions may consist of \_\_\_\_\_ bases and their \_\_\_\_\_.

6. Hemoglobin has a quaternary structure, which gives it the ability to regulate the addition and cleavage of oxygen thanks to \_\_\_\_\_: after joining the first oxygen molecule, the binding of the subsequent ones is facilitated.

7. The higher the concentration of components of a buffer system, the \_\_\_\_\_ its buffer capacity.

8. In tissues, hemoglobin associated with oxygen is exposed to \_\_\_\_\_, that is why the release of oxygen occurs.

9. \_\_\_\_\_ and \_\_\_\_\_ buffer systems make a major contribution to the maintenance of pH level in red blood cells.

10. The contribution of \_\_\_\_\_ buffer system into the total buffer capacity of blood is about 53 %.

11. The unit of buffer capacity is \_\_\_\_\_.

12. When a small amount of strong acid is added to the buffer solution the pH of the solution becomes \_\_\_\_\_.

13. In the phosphate buffer system \_\_\_\_\_ plays a role of an acid according to the protolytic theory.

14. Will there be a buffer system if one pours together 200 ml of 0.2 M  $NH_4OH$  solution and 100 ml of 0.04 M HCl solution?

15. Will there be a buffer system if one pours together 100 ml of 0.2 M NaOH solution and 100 ml of 0.1 M HCl solution?

16. The main contribution into the maintenance of pH in cells is made by a salt buffer system consisting of \_\_\_\_\_ and \_\_\_\_\_.

17. The largest buffer capacity, among buffer solutions with the same molarity, has the one in which \_\_\_\_\_.

18. \_\_\_\_\_ is the amount of carbon dioxide that can be dissolved in 100 ml of blood plasma, previously brought into equilibrium with a gas medium in which the partial pressure of carbon dioxide is 40 mm Hg.

19. If the ratio  $[\text{HCO}_3^-]:[\text{CO}_2]$  is lower than 20, there is an \_\_\_\_\_.

20. If the ratio  $[\text{HCO}_3^-]:[\text{CO}_2]$  is higher than 20, there is an \_\_\_\_\_.

### TASK № 15. HETEROGENEOUS EQUILIBRIA

1. Precipitate will be formed if the product of activities of ions of the hardly soluble substance in powers equal to the coefficients in the dissociation equation is \_\_\_\_\_ than the thermodynamic solubility product constant.

2. There will be no precipitate after the mixing of two solutions if the product of the activities of ions of hardly soluble substance in powers of coefficients in its dissociation equation is \_\_\_\_\_ than the value of its thermodynamic solubility product constant.

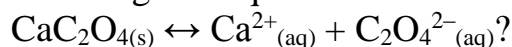
3. If the product of the activities of ions of hardly soluble substance in powers of coefficients in its dissociation equation is equal to the value of its thermodynamic solubility product constant, the solution is \_\_\_\_\_.

4. If the product of concentrations for ions that make a hardly soluble electrolyte is a little bit higher than  $K_s$ , but there is no precipitate in a solution, it means that \_\_\_\_\_.

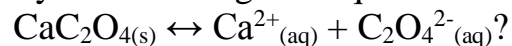
5. Single-type heterogeneous equilibrium is shifted towards the formation of \_\_\_\_\_ insoluble precipitate from ions that formed \_\_\_\_\_ insoluble one.

6. Simple comparison of  $K_s^0$  values for silver iodide and silver phosphate \_\_\_\_\_ be considered to predict which precipitate will be formed in a solution containing identical concentrations of  $\text{I}^-$  and  $\text{PO}_4^{3-}$  ions after the addition of silver nitrate.

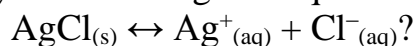
7. Will the precipitate of calcium oxalate be dissolved after the addition of acetic acid to the system with a given equilibrium:



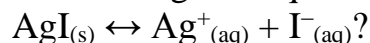
8. Will the precipitate of calcium oxalate be dissolved after the addition of hydrochloric acid to the system with a given equilibrium:



9. Will the precipitate of silver chloride be dissolved after the addition of ammonia solution to the system with a given equilibrium:



10. Will the precipitate of silver iodide be dissolved after the addition of ammonia solution to the system with a given equilibrium:



11. Write the formula for thermodynamic solubility product constant calculation for silver sulfate ( $\text{Ag}_2\text{SO}_4$ ).
12. Write at least 3 formulas of ions that can replace  $\text{Ca}^{2+}$  in hydroxyapatite that is the mineral component of bone tissue.
13. List salts that are most frequently found in kidney and urine bladder stones.
14. Write the equation for concentration solubility product constant calculation for hardly soluble calcium phosphate.
15. Will there be a precipitate if we add dry calcium chloride to the saturated solution of calcium sulfate?
16. Will there be a precipitate if we add dry calcium chloride to the saturated solution of lead (II) chloride?
17. Solubility of calcium sulfate is 0.21 g per 100 g of water. Calculate its  $K_S$  value.
18. The value of  $K_S$  for silver chloride is  $1.77 \cdot 10^{-10}$ . Calculate its molar solubility (mol/L).
19. Write the simplest formula of the major mineral component of bones.
20. Write the simplest formula of fluoroapatite.

### **TASK № 16. LAWS OF THERMODYNAMICS**

1. Write the general equation of the first law of thermodynamics.
2. Write the equation of the first law of thermodynamics for the isobaric process.
3. Write the equation of the first law of thermodynamics for the isochoric process.
4. Write the equation of the first law of thermodynamics for the isothermic process.
5. According to the first law of thermodynamics, the process in which all the energy supplied to a system in a form of heat turns to the increase in internal energy is called \_\_\_\_\_.
6. One can calculate the heat effect of hydration from the heat effect of the dissolving of a dry salt and the heat effect of the dissolving of a salt hydrate according to the \_\_\_\_\_ law.
7. Write the Boltzmann equation describing the statistical interpretation of the second law of thermodynamics.
8. Write the Clausius inequality reflecting the second law of thermodynamics for thermodynamically irreversible processes.
9. Write the Clausius equation reflecting the second law of thermodynamics for thermodynamically reversible processes.
10. Spontaneous processes in an isolated system cannot lead to the decrease of \_\_\_\_\_.

11. Inhibition constant in molecular docking is equal to \_\_\_\_\_.
12. Write the combined equation of the first and the second law of thermodynamics with  $\Delta G$ ,  $\Delta H$ ,  $T$ , and  $\Delta S$ .
13. The value of  $\Delta G$  in molecular docking can be positive even if  $\Delta H$  of complex formation is negative, if \_\_\_\_\_.
14. \_\_\_\_\_ system cannot exchange energy or matter with the environment.
15. According to the third law of thermodynamics the entropy of a substance at 0 K is equal to \_\_\_\_\_.
16. Molar heat capacity is equal to the amount of heat required to increase the temperature of 1 mole of a substance \_\_\_\_\_.
17. To calculate the absolute entropy of a gaseous substance one needs to find the definite integral from 0 to 298 K of the dependence of \_\_\_\_\_ on \_\_\_\_\_.
18. Write the equation connecting the constant of chemical equilibrium with  $\Delta G^0$  for a chemical reaction.
19. Except the energy of formation of each bond between ligand and receptor, in molecular docking the energy of \_\_\_\_\_ must be considered.
20. For a reaction with  $\Delta H_r^0 < 0$ , the higher the temperature, the \_\_\_\_\_ the constant of equilibrium.

### TASK № 17. ELECTROCHEMISTRY

1. Absolute ion movement rate in aqueous solutions \_\_\_\_\_ in the  $\text{Na}^+$ ,  $\text{OH}^-$ ,  $\text{H}^+$  row.
2. Electric conductivity of water solutions of electrolytes \_\_\_\_\_ with the increase in temperature.
3. The electrical conductivity of 0.1 M  $\text{H}_2\text{SO}_4$  solution is \_\_\_\_\_ than the electrical conductivity of 0.1 M  $\text{Na}_2\text{SO}_4$  solution.
4. In a row of biological fluids of a healthy person (urine, blood plasma, gastric juice, whole blood), electrical conductivity \_\_\_\_\_.
5. Specific electric conductivity of the electrolyte solution first \_\_\_\_\_ and then \_\_\_\_\_ with the decrease of its concentration.
6. The specific electric conductivity of the gastric juice of a healthy person is \_\_\_\_\_ than the specific electric conductivity of the whole blood.
7. Write a formula expressing the law of Kohlrausch with mobility values for cations and anions.
8. The ratio between the value of molar electric conductivity and the limiting molar electric conductivity is equal to the \_\_\_\_\_ of a weak electrolyte.
9. Write the Nernst equation for a metal electrode immersed in a solution of a salt of its cation with a natural logarithm.

10. Write the scheme of a standard hydrogen electrode.
11. The standard potential of the standard hydrogen electrode is equal to \_\_\_\_\_.
12. In persons with diabetes mellitus and inflammatory diseases of kidneys specific electric conductivity of urine is \_\_\_\_\_.
13. Silver chloride electrode serves as a \_\_\_\_\_ electrode in the pH-meter.
14. In the pH-meter, the determination electrode is a \_\_\_\_\_ electrode.
15. Write the processes taking place at the anode and the cathode in a copper-zinc galvanic cell.
16. The electromotive force of a silver-copper electrochemical cell  $\text{Cu} | \text{Cu}^{2+} || \text{Ag}^+ | \text{Ag}$  under standard conditions is \_\_\_\_\_ than the electromotive force of a silver-zinc electrochemical cell  $\text{Zn} | \text{Zn}^{2+} || \text{Ag}^+ | \text{Ag}$  in the same conditions.
17. In a copper-silver galvanic cell, the copper electrode is an \_\_\_\_\_ and the silver electrode is a \_\_\_\_\_.
18. A concentration galvanic cell is an element composed of two identical metals immersed in solutions of the same electrolyte but of \_\_\_\_\_ concentrations.
19. How electromotive force in the galvanic element is connected with the value of  $\Delta G$  for a chemical reaction taking place in that galvanic element?
20. The electromotive force of a galvanic cell is determined by the formula  $E = \varphi_2 - \varphi_1$ , where  $\varphi_1$  is the potential of an \_\_\_\_\_, while  $\varphi_2$  is the potential of a \_\_\_\_\_.

### TASK № 18. SURFACE PHENOMENA

1. Write the Gibbs equation connecting adsorption with the equilibrium concentration of a solute.
2. Surface activity is a derivative of \_\_\_\_\_ per \_\_\_\_\_ with a negative sign.
3. Give an example of a surface-inactive amino acid.
4. Surface active substances \_\_\_\_\_ the surface tension.
5. Surface inactive substances \_\_\_\_\_ the surface tension.
6. Surface nonactive substances \_\_\_\_\_ the surface tension.
7. If the number of drops of water solution of a certain substance dropping down from stalagmometer is lower than the number of drops of water, the solute is \_\_\_\_\_.
8. If the number of drops of water solution dropping down from stalagmometer is higher than the number of drops of water, the substance dissolved is \_\_\_\_\_.

9. The Ducklo–Traube rule states that the surface activity in the row of homologous surface active substances is growing approximately \_\_\_\_\_ times with the addition of each  $\text{CH}_2$  group.

10. How many times the surface activity of pentanol should be higher than surface activity of ethanol?

11. Adsorption of a surface active substance on the border between liquid and gaseous phase ends up with the formation of a \_\_\_\_\_ layer.

12. The equation of adsorption isotherm according to the Langmuir monomolecular adsorption theory at high concentrations of a solute can be written as follows \_\_\_\_\_.

13. Write the Langmuir equation.

14. Adsorption of a substance on the solid phase may not be finished after the formation of a \_\_\_\_\_ layer.

15. In mass-spectra the value of \_\_\_\_\_ is on the X-axis.

16. Write the Freundlich equation.

17. \_\_\_\_\_ molecules are well adsorbed on the polystyrene surface.

18. The stronger the affinity between a solid phase and a substance, the \_\_\_\_\_ the retention time during the column chromatography.

19. Affine chromatography is used for the purification of \_\_\_\_\_ from a serum on a column with immobilized antigen.

20. During the gel-filtration \_\_\_\_\_ molecules are washed from a column faster than \_\_\_\_\_ molecules.

## TASK № 19. COLLOID SOLUTIONS

1. It is \_\_\_\_\_ to obtain a colloid solution by the way of the dissolving of ethanol in water in standard conditions.

2. Colloid solution is a thermodynamically \_\_\_\_\_ system.

3. Colloid solution is a kinetically \_\_\_\_\_ system.

4. A dispersed system is a heterogeneous system consisting of a \_\_\_\_\_ and a \_\_\_\_\_.

5. The particle size of the dispersed phase of the colloid solution is in the range from \_\_\_\_\_ to \_\_\_\_\_ nanometers.

6. The opalescence of colloid solutions occurs due to \_\_\_\_\_.

7. At the same mass concentration of a solute, the osmotic pressure of the glucose solution is \_\_\_\_\_ than the osmotic pressure of the iron (III) hydroxide sol.

8. The lower the average mass of colloid particles, the higher the \_\_\_\_\_ stability of a sol.

9. The smaller the average size of diffuse layer for colloid particles, the \_\_\_\_\_ the aggregative stability of a sol.



10. The aggregate and the adsorption layer of a colloid particle build up together a \_\_\_\_\_.

11. The aggregate of a colloid particle is made of microcrystals of a \_\_\_\_\_ substance.

12. Electrolyte ions that are adsorbed directly on a surface of an aggregate are called \_\_\_\_\_ ions.

13. The granule together with the diffuse layer of counter ions makes up a \_\_\_\_\_.

14. The electrothermodynamic potential of a colloid particle occurs at the boundary between layers of \_\_\_\_\_ and \_\_\_\_\_.

15. The electrokinetic potential of a colloid particle occurs at the boundary between the \_\_\_\_\_ and the \_\_\_\_\_.

16. Electrolyte ions adsorbed directly on a crystalline solid surface and giving it an electric charge are called \_\_\_\_\_ ions.

17. Arrange the ions  $\text{NO}_3^-$ ,  $\text{PO}_4^{3-}$ ,  $\text{SO}_4^{2-}$  in the order of the decrease of the coagulation threshold for a sol with positively charged granules.

18. The diffusion layer in the sol particles consists of \_\_\_\_\_.

19. The nucleus of a colloid particle of a sol consists of an \_\_\_\_\_ and \_\_\_\_\_ ions.

20. When two sols with oppositely charged granules are mixed together, they will \_\_\_\_\_.

## TASK № 20. SOLUTIONS OF BIOPOLYMERS

1. The value of pH of the medium at which the protein is electrically neutral (has no overall charge), is called \_\_\_\_\_.

2. For aminodicarboxylic amino acid (for example, aspartic acid) the value of pI is in the \_\_\_\_\_ medium.

3. For diaminocarboxylic amino acid (for example, lysine) the value of pI is in the \_\_\_\_\_ medium.

4. The value of pI of a protein depends on \_\_\_\_\_ values of all its functional groups that can be protonated and deprotonated.

5. If pH of a solution is equal to pI for a given protein, it has a \_\_\_\_\_ charge.

6. If pH of a solution is lower than pI for a given protein, it has a \_\_\_\_\_ charge.

7. If pH of a solution is higher than pI for a given protein, it has a \_\_\_\_\_ charge.

8. At the isoelectric point solubility of a protein demonstrates its \_\_\_\_\_ value.

9. At the isoelectric point gelatinization rate of a protein solution demonstrates its \_\_\_\_\_ value.

10. At the isoelectric point the swelling degree of a protein demonstrates its \_\_\_\_\_ value.
11. At the isoelectric point the stability against the salting out of a solution for a protein demonstrates its \_\_\_\_\_ value.
12. Write the formula of a salt that is usually used for salting out a protein from its water solution.
13. Salting out process of a protein from its water solution can be explained by the \_\_\_\_\_ for water molecules between a protein and an electrolyte.
14. Salting in process can be explained by the \_\_\_\_\_ of ions of an electrolyte by a protein.
15. Which electrode does the protein move to during the process of native gel electrophoresis if  $pI = 3.0$  and the  $pH$  of the solution is  $5.0$ ?
16. Amino acid substitution of glutamic acid by lysine in the 6<sup>th</sup> position hemagglutinin beta-chain may be detected with the help of \_\_\_\_\_ electrophoresis.
17. Which electrode does the protein move to during the process of native gel electrophoresis if  $pI = 5.0$  and the  $pH$  of the solution is  $5.0$ ?
18. During the gel electrophoresis proteins pre-treated by SDS (sodium dodecyl sulfate) are separated according to the \_\_\_\_\_ of their molecules only.
19. The charge of the protein with  $pI = 9.5$  in the aqueous solution with  $pH = 7.5$  is \_\_\_\_\_.
20. The charge of the protein with  $pI = 4.5$  in the aqueous solution with  $pH = 6.4$  is \_\_\_\_\_.

## ANSWERS TO THE TASKS

### Task 1

- |             |                          |                                  |
|-------------|--------------------------|----------------------------------|
| 1. 0.644 g. | 8. 0.75 %.               | 15. 0.1487 mol/l.                |
| 2. 9.55 g.  | 9. 6.24 L.               | 16. 0.311 mol/kg.                |
| 3. 5.40 g.  | 10. 10.582 mol/kg.       | 17. 0.0527 N.                    |
| 4. 14.41 g. | 11. 1.35 mol/l.          | 18. 2.176 N.                     |
| 5. 100 ml.  | 12. 0.88 % (0.8775).     | 19. 0.176 g/ml.                  |
| 6. 8.66 %.  | 13. 0.28 mol/l (0.2778). | 20. $3.624 \cdot 10^{-5}$ mol/l. |
| 7. 0.73 ml. | 14. 0.0108 %.            |                                  |

### Task 2

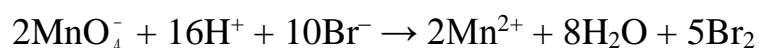
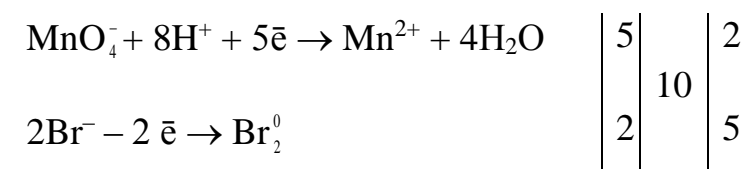
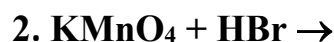
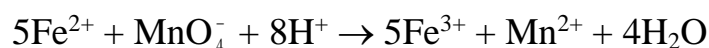
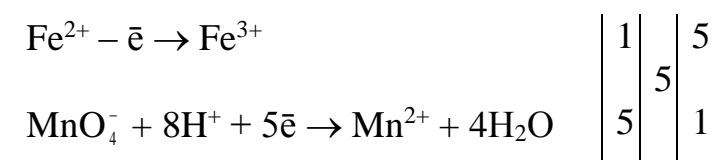
1.  $Al(OH)_3 + KOH_{\text{excess, conc.}} \rightarrow$  potassium hexahydroxoaluminate
2.  $Zn(OH)_2 + LiOH_{\text{excess, conc.}} \rightarrow$  lithium tetrahydroxozincate
3.  $AlCl_3 + NaOH_{\text{excess, conc.}} \rightarrow$  sodium hexahydroxoaluminate + NaCl
4.  $ZnSO_4 + LiOH_{\text{excess}} \rightarrow$  lithium tetrahydroxozincate +  $Li_2SO_4$
5.  $CrCl_3 + KOH_{\text{excess}} \rightarrow$  potassium hexahydroxochromate (III) + KCl
6.  $FeCl_3 + KCN_{\text{excess}} \rightarrow$  potassium hexacyanoferrate (III) + KCl

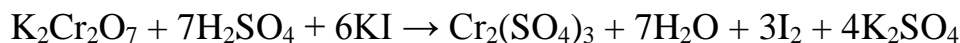
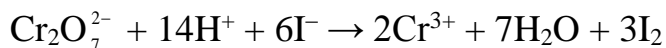
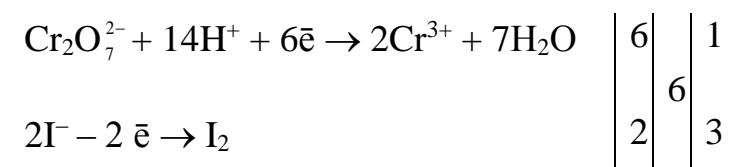
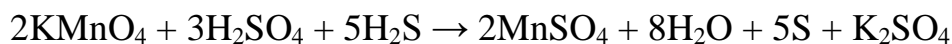
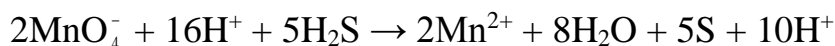
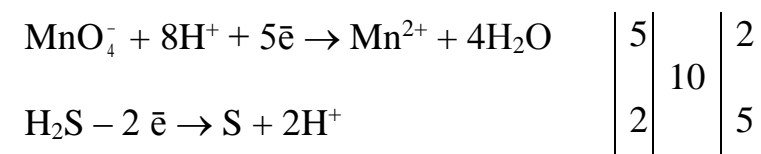
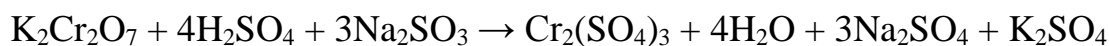
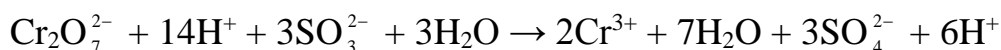
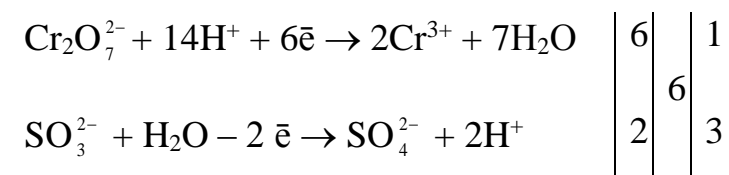
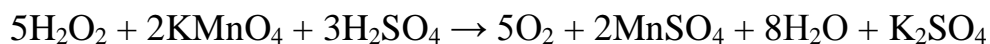
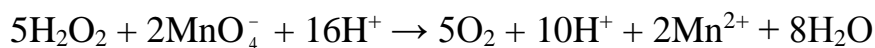
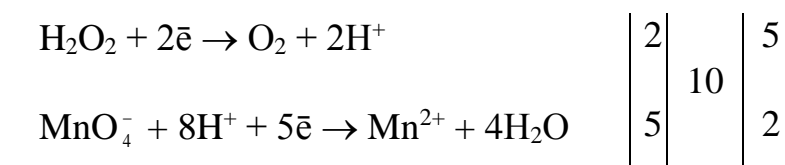
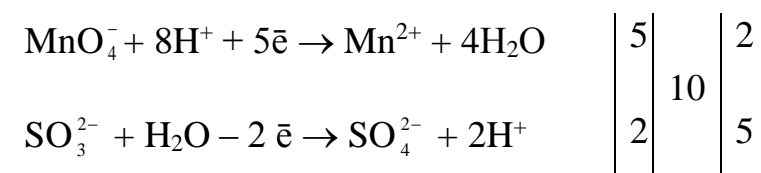
7.  $\text{FeCl}_2 + \text{KCN}_{\text{excess}} \rightarrow$  potassium hexacyanoferrate (II) + KCl
8.  $\text{Cu}(\text{NO}_3)_2 + \text{NH}_3 \rightarrow$  tetraamminecopper (II) nitrate
9.  $\text{AgCl} + \text{NH}_3 \rightarrow$  diamminesilver (I) chloride
10.  $\text{Zn}(\text{NO}_3)_2 + \text{NH}_4\text{OH} \rightarrow$  tetraamminezinc nitrate +  $\text{H}_2\text{O}$
11.  $\text{AgBr} + \text{NH}_4\text{OH} \rightarrow$  diamminesilver (I) bromide +  $\text{H}_2\text{O}$
12.  $\text{NiCl}_2 + \text{NH}_3_{\text{excess}} \rightarrow$  hexaamminenickel (II) chloride
13.  $\text{HgI}_2 + \text{KI} \rightarrow$  potassium tetraiodomercurate (II)
14.  $\text{Cd}(\text{NO}_3)_2 + \text{KI}_{\text{excess}} \rightarrow$  potassium tetraiodocadmiate (II) +  $\text{KNO}_3$
15.  $\text{AlCl}_3 + \text{NaCl} \rightarrow$  sodium tetrachloroaluminate
16.  $\text{AlF}_3 + \text{NaF} \rightarrow$  sodium hexafluoroaluminate
17.  $\text{BF}_3 + \text{LiF} \rightarrow$  lithium tetrafluoroborate
18.  $\text{AlCl}_3 + \text{LiH}_{\text{excess}} \rightarrow$  lithium tetrahydridoaluminate + LiCl
19.  $\text{Ni} + \text{CO} \rightarrow$  nickel tetracarbonil
20.  $\text{MnSO}_4 + \text{H}_2\text{O} \rightarrow$  manganese (II) hexaaquasulfate

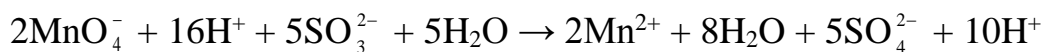
### Task 3

- |                    |                         |                |
|--------------------|-------------------------|----------------|
| 1. 0.077 M.        | 8. 0.08292 M.           | 14. 382.06 ml. |
| 2. 0.05817 M.      | 9. 1.667 g.             | 15. 295.0 ml.  |
| 3. 0.008036 g/ml.  | 10. 1.291 g.            | 16. 5 %.       |
| 4. 0.0005692 g/ml. | 11. 10.15 %.            | 17. 0.06330 M. |
| 5. 0.06892 M.      | 12. 25.914 g.           | 18. 0.02001 M. |
| 6. 0.12 g.         | 13. 0.2015 mol/L (HCl), | 19. 1.01063 g. |
| 7. 0.1364 g.       | 0.2065 mol/L (NaOH).    | 20. 15.141 %.  |

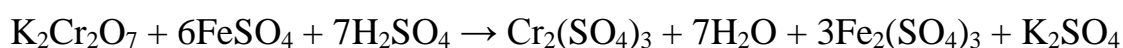
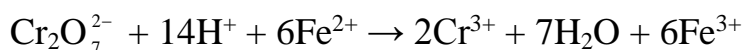
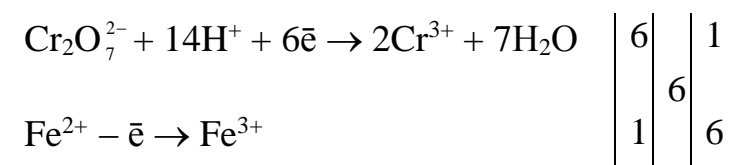
### Task 4



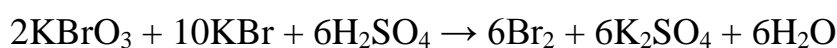
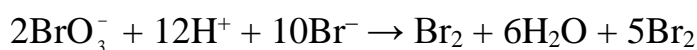
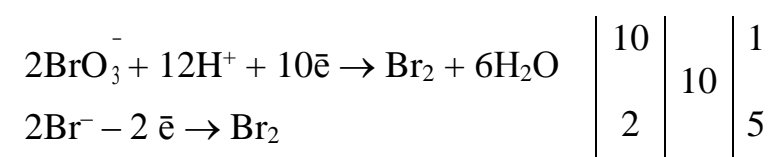
**3.  $\text{K}_2\text{Cr}_2\text{O}_7 + \text{KI} + \text{H}_2\text{SO}_4 \rightarrow$** **4.  $\text{KMnO}_4 + \text{H}_2\text{S} + \text{H}_2\text{SO}_4 \rightarrow \text{S} \downarrow + \dots$** **5.  $\text{K}_2\text{Cr}_2\text{O}_7 + \text{Na}_2\text{SO}_3 + \text{H}_2\text{SO}_4 \rightarrow$** **6.  $\text{H}_2\text{O}_2 + \text{KMnO}_4 + \text{H}_2\text{SO}_4 \rightarrow \text{O}_2 + \dots$** **7.  $\text{KMnO}_4 + \text{Na}_2\text{SO}_3 + \text{H}_2\text{SO}_4 \rightarrow$** 



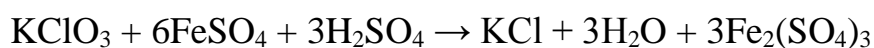
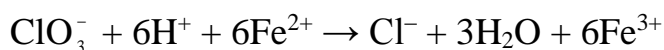
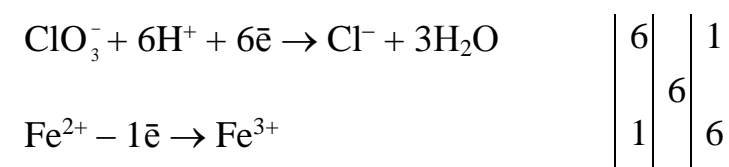
### 8. $\text{K}_2\text{Cr}_2\text{O}_7 + \text{FeSO}_4 + \text{H}_2\text{SO}_4 \rightarrow$



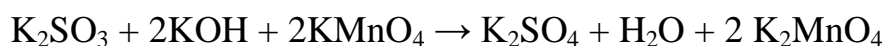
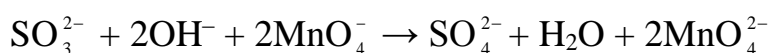
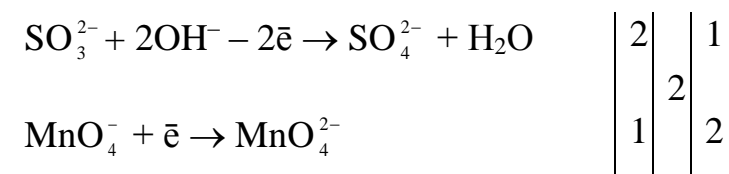
### 9. $\text{KBrO}_3 + \text{KBr} + \text{H}_2\text{SO}_4 \rightarrow \text{Br}_2 + \dots$

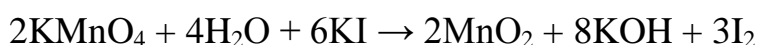
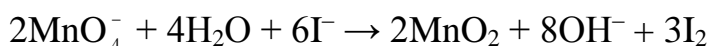
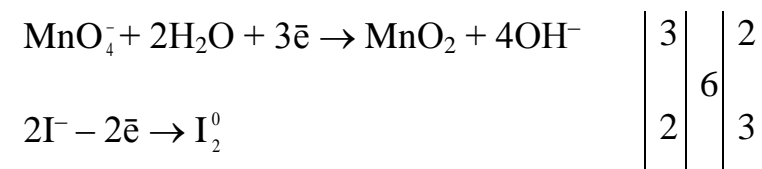
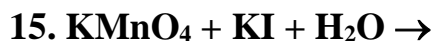
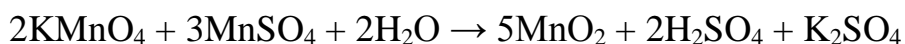
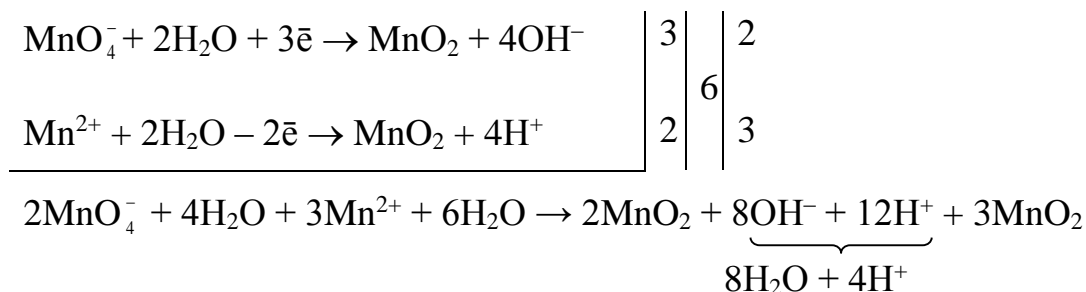
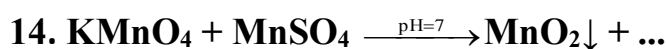
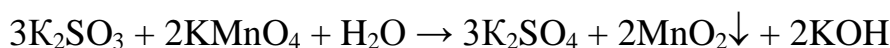
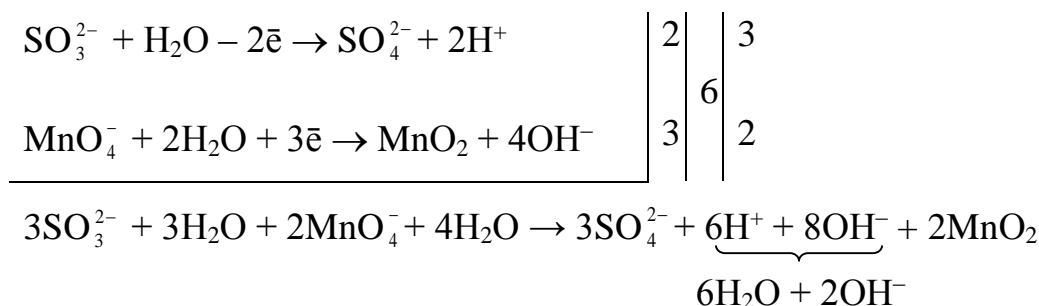
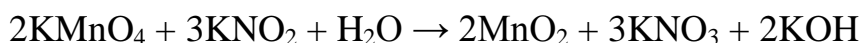
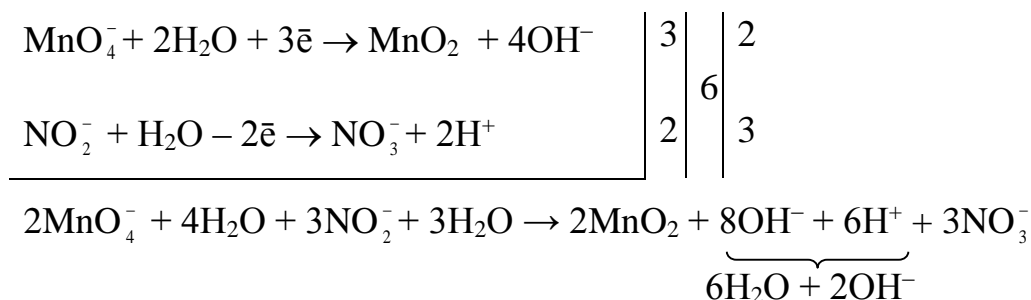


### 10. $\text{FeSO}_4 + \text{KClO}_3 + \text{H}_2\text{SO}_4 \rightarrow \text{KCl} + \dots$

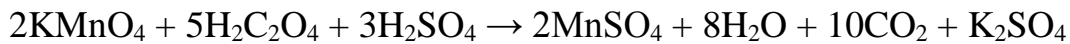
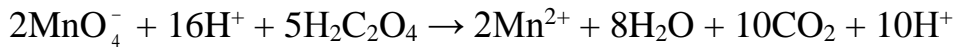
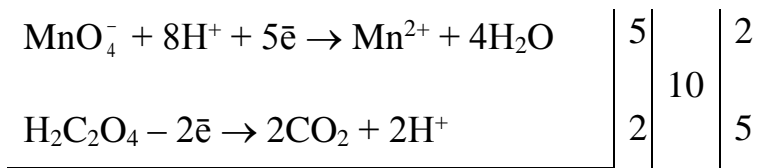


### 11. $\text{K}_2\text{SO}_3 + \text{KMnO}_4 + \text{KOH} \rightarrow$

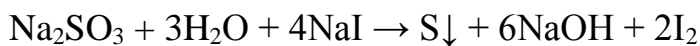
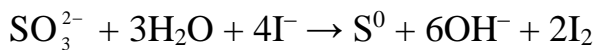
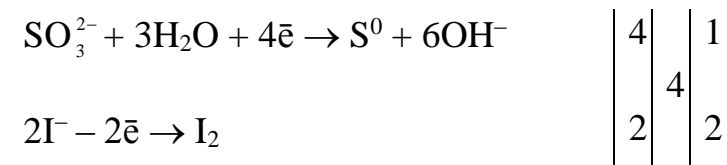




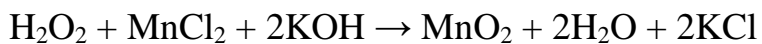
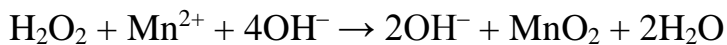
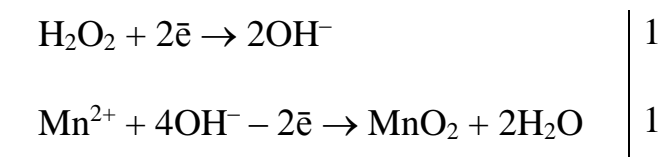
**16.  $\text{KMnO}_4 + \text{H}_2\text{C}_2\text{O}_4 + \text{H}_2\text{SO}_4 \rightarrow$**



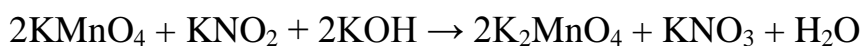
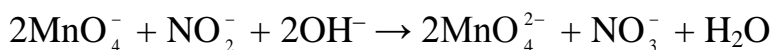
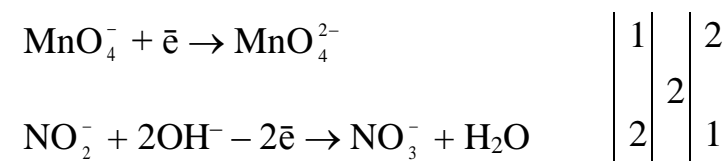
**17.  $\text{Na}_2\text{SO}_3 + \text{NaI} + \text{H}_2\text{O} \rightarrow \text{S}\downarrow$**



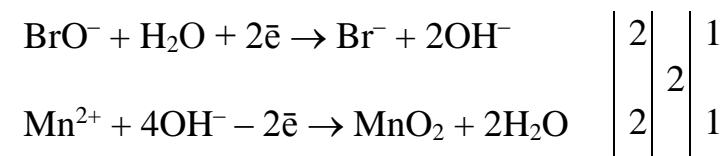
**18.  $\text{H}_2\text{O}_2 + \text{MnCl}_2 + \text{KOH} \rightarrow \text{MnO}_2 + \dots$**

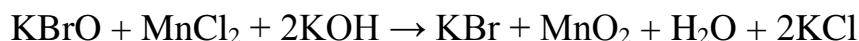



**19.  $\text{KMnO}_4 + \text{KNO}_2 + \text{KOH} \rightarrow$**



**20.  $\text{KBrO} + \text{MnCl}_2 + \text{KOH} \rightarrow \text{KBr} + \dots$**





### Task 5

- |                   |                      |                   |                            |
|-------------------|----------------------|-------------------|----------------------------|
| 1. 3.13 kPa.      | 6. 776.67 g/mol.     | 11. 103.21 g/mol. | 16. 237.59 kPa.            |
| 2. 2.94 kPa.      | 7. 16584 g/mol.      | 12. 249.42 kPa.   | 17. 418.78 g/mol.          |
| 3. 42.53 kPa.     | 8. 100.104 °C.       | 13. 137.64 kPa.   | 18. $4.64 \cdot 10^{-4}$ . |
| 4. 180.001 g/mol. | 9. 3.66 kg · K/mol.  | 14. -2,816 °C.    | 19. $7.34 \cdot 10^{-4}$ . |
| 5. 7.779 Kg.      | 10. S <sub>8</sub> . | 15. 100.572 °C.   | 20. 128.25 g/mol.          |

### Task 6

- |                    |                             |                              |
|--------------------|-----------------------------|------------------------------|
| 1. -530.4 kJ/mol.  | 8. -139.478 kJ/mol.         | 15. $50.69 \cdot 10^{23}$ .  |
| 2. -91.7 kJ/mol.   | 9. -108.2 kJ/mol.           | 16. $136.84 \cdot 10^{23}$ . |
| 3. 103.6 J/mol·K.  | 10. -77.8 kJ/mol.           | 17. 100.67 J/mol · K.        |
| 4. -211.67 kJ/mol. | 11. -495.602 kJ/mol.        | 18. -16.39 kJ/mol.           |
| 5. -101.2 kJ/mol.  | 12. -542.702 kJ/mol.        | 19. $3.381 \cdot 10^{17}$ .  |
| 6. 51.4 kJ/mol.    | 13. 66.1 kJ.                | 20. 2.26.                    |
| 7. -26.31 J/mol·K. | 14. $29.71 \cdot 10^{23}$ . |                              |

### Task 7

- |                        |            |                     |                             |
|------------------------|------------|---------------------|-----------------------------|
| 1. 0.1867 mol/L · sec. | 6. 27.222. | 11. 2*↑; const; 2*↓ | 16. 89392 J/mol.            |
| 2. 0.0152 mol/L · sec. | 7. 0.7083  | 12. 1.0726.         | 17. 93679 J/mol.            |
| 3. 33.333.             | 8. 2.      | 13. 1.0525.         | 18. 0.0004265.              |
| 4. 5000.               | 9. 65°C.   | 14. 6.7287.         | 19. 100 kJ/mol.             |
| 5. 4.                  | 10. 4.06.  | 15. 66.4795.        | 20. $1.373 \cdot 10^{32}$ . |

### Task 8

- |          |           |                            |                   |
|----------|-----------|----------------------------|-------------------|
| 1. 4.32. | 6. 2.76.  | 11. 10.6.                  | 16. 0.0571 mol/L. |
| 2. 9.52. | 7. 2.73.  | 12. 9.25.                  | 17. 0.0648 g.     |
| 3. 3.52. | 8. 0.134. | 13. 11.78.                 | 18. 0.0817 mol/L. |
| 4. 3.1.  | 9. 11.7.  | 14. $1.98 \cdot 10^{-4}$ . | 19. 10.           |
| 5. 4.23. | 10. 3.62. | 15. 5.5.                   | 20. 1.585.        |

### Task 9

- |          |                            |              |
|----------|----------------------------|--------------|
| 1. 7.21. | 8. Yes.                    | 15. 8.29.    |
| 2. 5.18. | 9. 2.35 mmol/L · pH unit.  | 16. 3.48 ml. |
| 3. 4.68. | 10. 0.01 mol/L · pH unit.  | 17. 0.45 g.  |
| 4. 4.40. | 11. 0.01 mol/L · pH unit.  | 18. 4.76.    |
| 5. 4.35. | 12. 0.002 mol/L · pH unit. | 19. 7.11.    |
| 6. 8.93. | 13. 0.132.                 | 20. 7.18 g.  |
| 7. 8.25. | 14. 1.55.                  |              |

### Task 10

1.  $\{[\text{mAgCNS}] \cdot \text{nCNS}^- \cdot (\text{n} - \text{x})\text{K}^+\}^{\text{x}-} \cdot \text{xK}^+$



2.  $\{[mPbCl_2] \cdot nPb^{2+} \cdot (2n - x)NO_3^-\}^{x+} \cdot xNO_3^-$
3.  $\{[mAg_3PO_4] \cdot n(PO_4)^{3-} \cdot (3n - x)Na^+\}^{x-} \cdot xNa^+$
4.  $\{[mAg_2CrO_4] \cdot nCrO_4^{2-} \cdot (2n - x)K^+\}^{x-} \cdot xK^+$
5.  $\{[mAgBr] \cdot nAg^+ \cdot (n - x)NO_3^-\}^{x+} \cdot xNO_3^-$
6.  $\{[mMn_3(PO_4)_2] \cdot nPO_4^{3-} \cdot (3n - x)Na^+\}^{x-} \cdot xNa^+$
7.  $\{[mCoS] \cdot nCo^{2+} \cdot (n - x)SO_4^{2-}\}^{x+} \cdot xSO_4^{2-}$
8.  $\{[mCoS] \cdot nS^{2-} \cdot (2n - x)NH_4^+\}^{x-} \cdot xNH_4^+$
9.  $\{[mBaSO_4] \cdot nBa^{2+} \cdot (2n - x)NO_3^-\}^{x+} \cdot xNO_3^-$
10.  $\{[mAgBr] \cdot nBr^- \cdot (n - x)K^+\}^{x-} \cdot xK^+$
11.  $\{[mBaCrO_4] \cdot nBa^{2+} \cdot (2n - x)Cl^-\}^{x+} \cdot xCl^-$
12.  $\{[mAgI] \cdot nI^- \cdot (n - x)K^+\}^{x-} \cdot xK^+$
13.  $\{[mCuS] \cdot nS^{2-} \cdot (2n - x)NH_4^+\}^{x-} \cdot xNH_4^+$
14.  $\{[mPbSO_4] \cdot nSO_4^{2-} \cdot (2n - x)Na^+\}^{x-} \cdot xNa^+$
15.  $\{[mPbSO_4] \cdot nPb^{2+} \cdot (2n - x)NO_3^-\}^{x+} \cdot xNO_3^-$
16.  $\{[mAgCl] \cdot nCl^- \cdot (n - x)Na^+\}^{x-} \cdot xNa^+$
17.  $\{[mBaCO_3] \cdot nBa^{2+} \cdot (2n - x)Cl^-\}^{x+} \cdot xCl^-$
18.  $\{[mBaCO_3] \cdot nCO_3^{2-} \cdot (2n - x)NH_4^+\}^{x-} \cdot xNH_4^+$
19.  $\{[mMnS] \cdot nS^{2-} \cdot (2n - x)NH_4^+\}^{x-} \cdot xNH_4^+$
20.  $\{[mPbI] \cdot nI^- \cdot (n - x)K^+\}^{x-} \cdot xK^+$

### Task 11

- |                              |                                             |                               |
|------------------------------|---------------------------------------------|-------------------------------|
| 1. 0.045.                    | 8. $Na_2B_4O_7 \cdot 10H_2O$ .              | 15. reverse.                  |
| 2. equivalence point.        | 9. $KMnO_4$ is a self-indicator.            | 16. substitutive.             |
| 3. interval of color change. | 10. $C_{N1} \cdot V_1 = C_{N2} \cdot V_2$ . | 17. $H_2C_2O_4 \cdot 2H_2O$ . |
| 4. 7.                        | 11. $KMnO_4$ .                              | 18. $I_2$ .                   |
| 5. basic.                    | 12. starch.                                 | 19. 1.                        |
| 6. acidic.                   | 13. stronger.                               | 20. permanent.                |
| 7. $H_2C_2O_4 \cdot 2H_2O$ . | 14. the direct.                             |                               |

### Task 12

- |                                   |                       |                                                    |
|-----------------------------------|-----------------------|----------------------------------------------------|
| 1. $Na^+$ .                       | 8. aquaporins.        | 15. $\downarrow$ synthesis.                        |
| 2. $K^+$ .                        | 9. external pressure. | 16. hypertonic.                                    |
| 3. hypotonic.                     | 10. lowered.          | 17. lower, higher.                                 |
| 4. oncotic pressure.              | 11. same.             | 18. hydrodynamic pressure<br>and oncotic pressure. |
| 5. $Cl^-$ .                       | 12. higher.           | 19. 3.                                             |
| 6. $HPO_4^{2-}$ and $H_2PO_4^-$ . | 13. isotonic.         | 20. lower.                                         |
| 7. 0.85–0.90 %; 4.5–5 %.          | 14. 0.001.            |                                                    |

### Task 13

1. 5–8.
2. 7.36–7.44.
3. 1.5–3.5 (0.9–2.0).
4. 8.6–9.0.
5. 5.6–7.9.
6. strong and weak.
7. concentration of  $H^+$  ions.
8. titrimetric.
9. pH-meter.
10. non-dissociated molecules of weak acids.
11. total acidity, active acidity.
12. potentiometric, calorimetric.
13. acidosis.
14. metabolic acidosis.
15. alkalosis.
16. metabolic alkalosis.
17. more.
18. buffer system.
19.  $< 7$ .
20.  $> 7$ .

#### Task 14

1. buffer.
2.  $pH = 14 - pK_b - \log(C_{(salt)}/C_{(base)})$ .
3. 1 : 1.
4.  $\pm 1$ .
5. weak; salts.
6. cooperativity.
7. higher.
8. protonation.
9. hydrocarbonate and hemoglobin.
10. hydrocarbonate.
11. mol/L · pH units.
12. approximately equal (will remain the same).
13.  $H_2PO_4^-$ .
14. yes.
15. no.
16.  $K_2CO_3$  and  $KHCO_3$ .
17. absolute values of the molarity of the components are the largest.
18. alkaline reserve of blood.
19. acidosis.
20. alkalosis.

#### Task 15

1. more.
2. less.
3. saturated.
4. product of activities of ions of the hardly soluble substance in powers equal to the coefficients in the dissociation equation is less than the thermodynamic solubility constant.
5. more; less.
6. can not.
7. no.
8. yes.
9. yes.
10. no.
11.  $K_s^0 = a^2(Ag^+) \cdot a(SO_4^{2-})$ .
12.  $Be^{2+}$ ,  $Ba^{2+}$ ,  $Sr^{2+}$ ,  $Pb^{2+}$ ,  $Mg^{2+}$ .
13. Calcium oxalate, urate, and phosphate.
14.  $K_s = a^3(Ca^{2+}) \cdot a^2(PO_4^{3-})$ .
15. yes.
16. yes.
17.  $2.37 \cdot 10^{-4}$ .
18.  $1.33 \cdot 10^{-5}$ .
19.  $Ca_5(PO_4)_3OH$ .
20.  $Ca_5(PO_4)_3F$ .

#### Task 16

1.  $Q = \Delta U + A$ .
2.  $Q_p = \Delta H$ .
3.  $Q_v = \Delta U$ .
4.  $Q_T = A$ .
5. isochoric.
6. Hess's.
7.  $S = k \cdot \ln w$ .
8.  $\Delta S > Q/T$ .
9.  $\Delta S = Q/T$ .
10. entropy.
11.  $1 / K_{eq}$ .
12.  $\Delta G = \Delta H - T \cdot \Delta S$ .
13.  $|T \cdot \Delta S| > |\Delta H|$ , while  $\Delta S < 0$ .
14. isolated.
15. 0 (zero).
16. by one K.
17. heat capacity; temperature.
18.  $\Delta G^0 = -R \cdot T \cdot \ln K_{ch.eq}$ .
19. dehydration.
20. lower.

#### Task 17

1. increases.
2. increases.
3. higher.
4. decreases.
5. increases; decreases.
6. higher.
11. zero.
12. decreases.
13. reference.
14. glass.
15. anode:  $Zn - 2\bar{e} \rightarrow Zn^{2+}$ ; cathode:  $Cu^{2+} + 2\bar{e} \rightarrow Cu$ .
16. lower.

7.  $\lambda_m^0 = U_{\text{cat}} + U_{\text{an}}$ .      17. anode; cathode.  
 8. dissociation degree.      18. different.  
 9.  $\varphi_{\text{Me}^{n+}/\text{Me}} = \varphi_{\text{Me}^{n+}/\text{Me}}^0 + \text{RT}/nF \ln a_{\text{Me}^{n+}}$ .      19.  $\Delta G = -nFE$ .  
 10. (Pt)  $\text{H}_2 | \text{H}^+$ .      20. anode; cathode.

### Task 18

1.  $\Gamma = (-\Delta\delta/\Delta C) \cdot C/\text{RT}$ ; ( $\Gamma = (-d\delta/dC) \cdot C/\text{RT}$ ).      11. monomolecular.  
 2. surface tension; concentration.      12.  $\Gamma = \Gamma_\infty$ .  
 3. glycine.      13.  $\Gamma = \Gamma_\infty \cdot C/(K + C)$ .  
 4. decrease.      14. monomolecular.  
 5. increase.      15. mass to charge ratio.  
 6. don't change.      16.  $\Gamma = KC^{1/n}$ .  
 7. surface inactive substance.      17. hydrophobic.  
 8. surface active substance.      18. higher.  
 9. 3 times higher.      19. antibodies.  
 10. 27 times higher.      20. big; small.

### Task 19

1. impossible.      11. hardly soluble.  
 2. unstable.      12. potential-determining.  
 3. stable.      13. micelle.  
 4. dispersed phase;      14. potential-determining ions;  
     dispersion medium.      counterions.  
 5. 1–100.      15. granule; diffuse layer.  
 6. light scattering.      16. potential-determining.  
 7. higher.      17.  $\text{NO}_3^-$ ,  $\text{SO}_4^{2-}$ ,  $\text{PO}_4^{3-}$ .  
 8. sedimentation.      18. counter ions.  
 9. lower.      19. aggregate; potential-determining.  
 10. granule.      20. coagulate.

### Task 20

1. isoelectric point.      8. lowest.      15. anode.  
 2. acidic.      9. highest.      16. native gel.  
 3. basic.      10. lowest.      17. the protein will not move.  
 4.  $\text{pK}_a$ .      11. lowest.      18. molecular masses.  
 5. neutral.      12.  $(\text{NH}_4)_2\text{SO}_4$ .      19. positive.  
 6. positive.      13. competition.      20. negative.  
 7. negative.      14. adsorption / binding.

## REFERENCES

1. *Общая химия* : учебное пособие / С. В. Ткачѳв, В. В. Хрусталѳв. Минск : Вышэйшая школа, 2020. 495 с.
2. *Болтromeюк, В. В.* Общая химия : учебно-методическое пособие / В.В.Болтromeюк. Гродно : ГрГМУ, 2020. 576 с.
3. *Медицинская химия* : учеб. для мед. вузов IV ур. аккр. / под ред. В. А. Калибачук. 3-е изд., испр. Киев, 2017. 400 с.
4. *Лабораторные работы по общей химии* / В. В. Хрусталѳв [и др.]. Минск : БГМУ, 2019. 40 с.
5. *Colloquium in General Chemistry* / V.V.Khrustalev et al. 2nd edition. Minsk : BSMU, 2021. 48 p.
6. *Atkins, P.* Atkins' Physical Chemistry / P. Atkins, J. de Paula. 10<sup>th</sup> ed. Oxford University Press, 2014. 500 p.
7. *Kontogeorgis, G. M.* Introduction to Applied Surface and Colloid Chemistry / G. M. Kontogeorgis, S. Kiil. Wiley, 2016. 388 p.

## CONTENTS

TASK № 1. PREPARATION OF SOLUTIONS .....	4
TASK № 2. COMPLEX COMPOUNDS.....	5
TASK № 3. CALCULATIONS IN TITRIMETRIC ANALYSIS .....	6
TASK № 4. OXIDATION-REDUCTION PROCESSES.....	7
TASK № 5. COLLIGATIVE PROPERTIES OF SOLUTIONS: CALCULATIONS .....	8
TASK № 6. CHEMICAL THERMODYNAMICS.....	10
TASK № 7. CHEMICAL KINETICS .....	11
TASK № 8. ACIDITY OF WATER SOLUTIONS .....	12
TASK № 9. BUFFER SYSTEMS .....	13
TASK № 10. STRUCTURE OF COLLOID PARTICLES .....	15
TASK № 11. TITRIMETRIC ANALYSIS.....	16
TASK № 12. COLLIGATIVE PROPERTIES OF SOLUTIONS: THEORY ....	17
TASK № 13. ACIDITY OF BIOLOGICAL FLUIDS.....	18
TASK № 14. BUFFERING SYSTEMS OF HUMAN BODY .....	19
TASK № 15. HETEROGENEOUS EQUILIBRIA.....	20
TASK № 16. LAWS OF THERMODYNAMICS .....	21
TASK № 17. ELECTROCHEMISTRY .....	22
TASK № 18. SURFACE PHENOMENA.....	23
TASK № 19. COLLOID SOLUTIONS .....	24
TASK № 20. SOLUTIONS OF BIOPOLYMERS.....	25
ANSWERS TO THE TASKS .....	26
REFERENCES .....	36

ISBN 978-985-21-1005-1

